


a casa come a scuola

RF
RINO FABBRI
EDITORE

1^a ELEMENTARE QUADERNO DI ARITMETICA

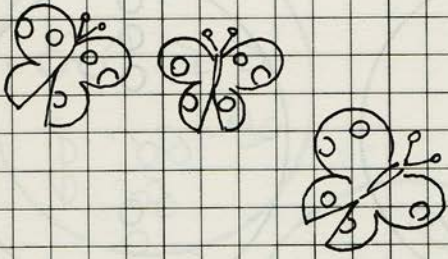


A. MANZI
"a casa
come a scuola"

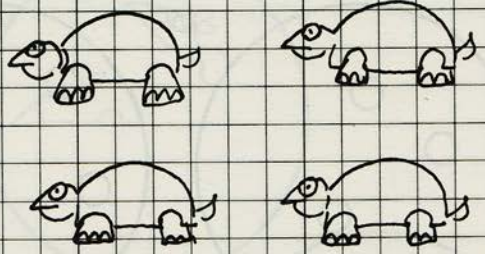


Questo volume sprovvisto del talloncino a fronte
è da considerarsi copia di saggio fuori commercio
esente da IVA
(D.P.R. 26 ottobre 1972 n. 633 Art. 2 Sub c).

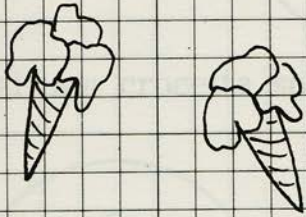
Lire 1.400



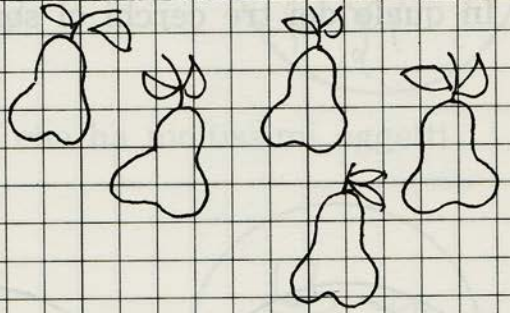
Molte o poche?





Molte o poche?



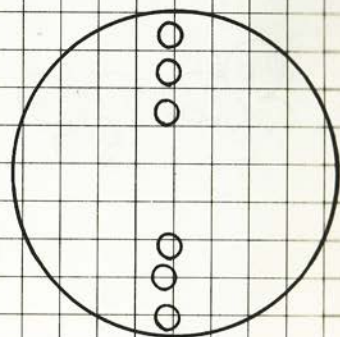
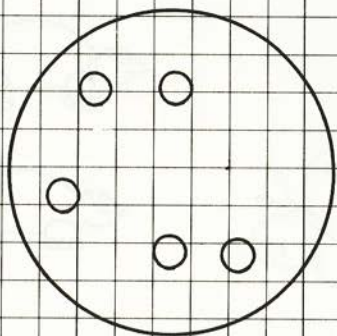
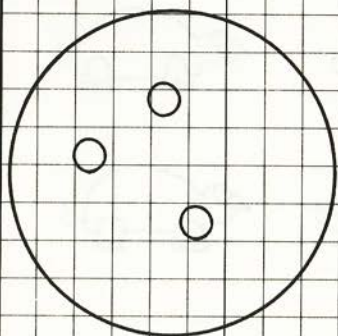
Molto o poco?



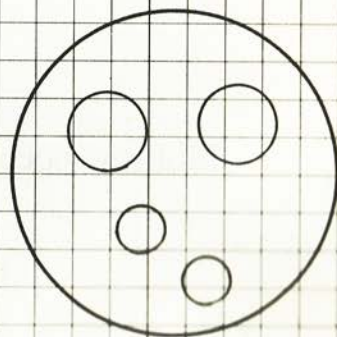
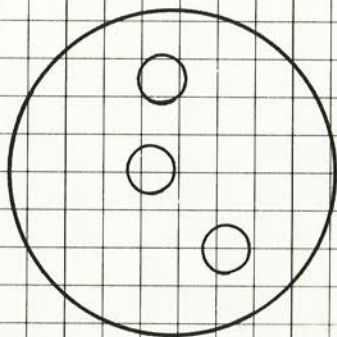
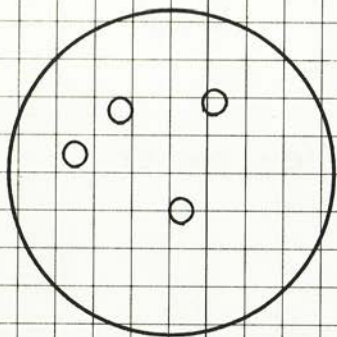
Molte o poche?



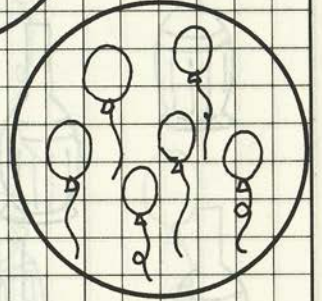
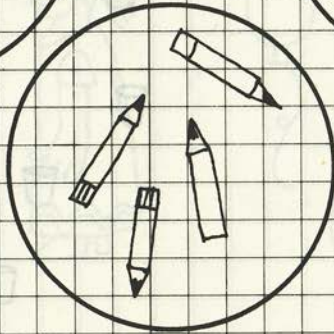
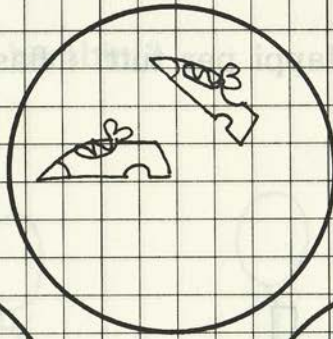
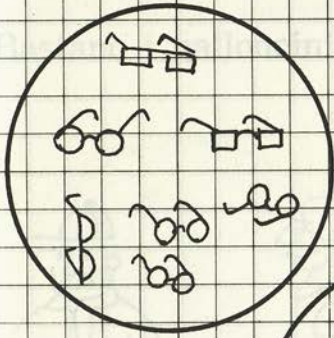
Colora il gruppo dove ci sono molti fiori.



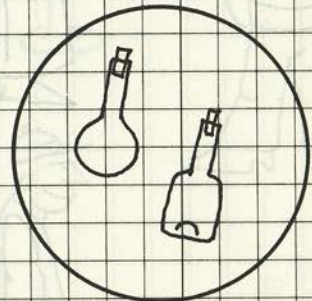
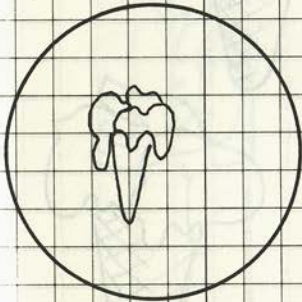
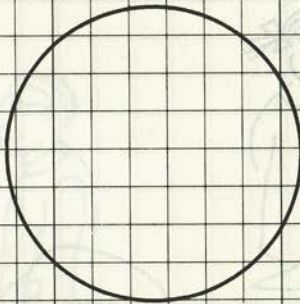
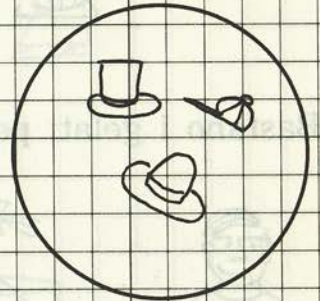
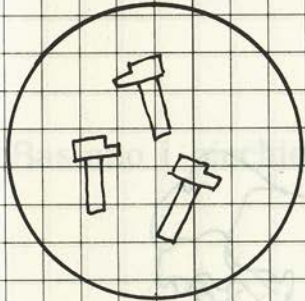
In quale dei tre cerchi ci sono molte palline?



In quale dei tre cerchi ci sono poche palline?




Fai una crocetta sotto il cerchio che ha moltissimi oggetti

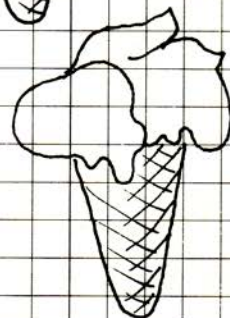




Fai una crocetta sotto il cerchio che ha pochissimi oggetti.




Bastano i tappi per tutti i fiaschi?



Bastano i gelati per tutti i bambini?



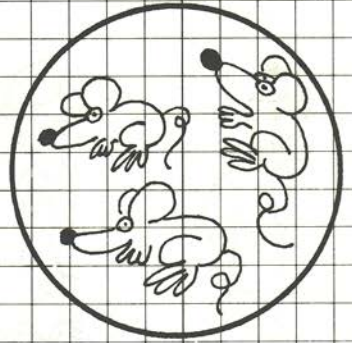


Bastano i palloncini per tutti i bambini?



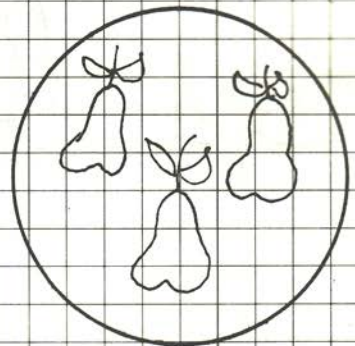
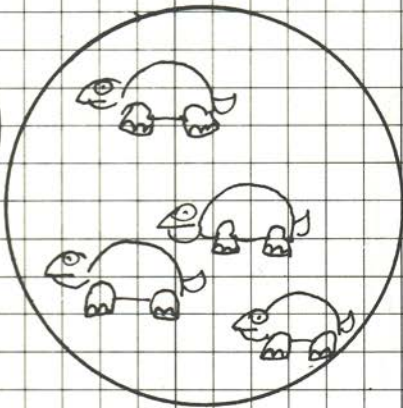
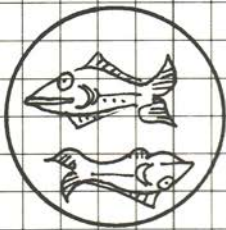
Bastano i bicchieri per tutte le persone?



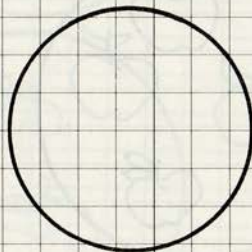




In quale cerchio ci sono più elementi? Colora dove ci sono più elementi.




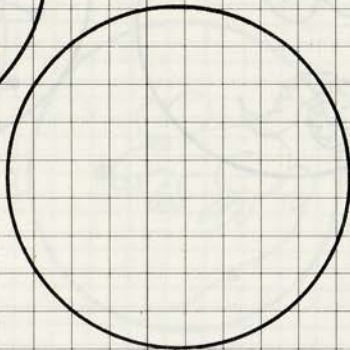
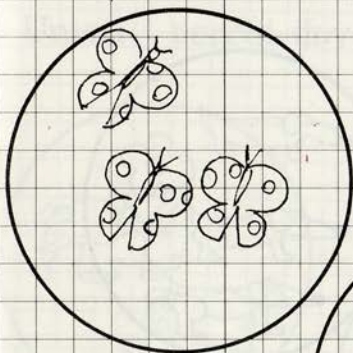
Dove ci sono meno elementi?





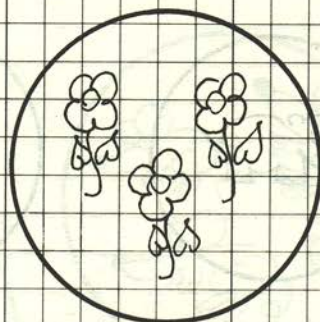

Dove ci sono più elementi?




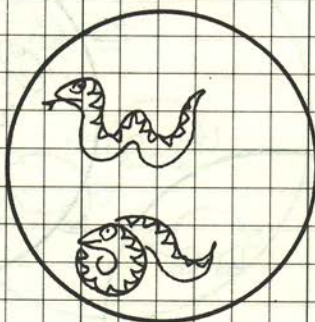
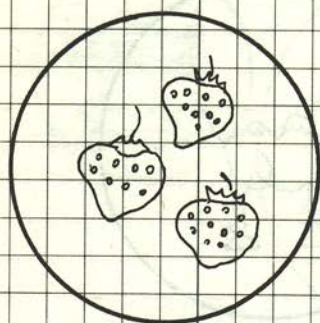
Dove ci sono meno elementi?



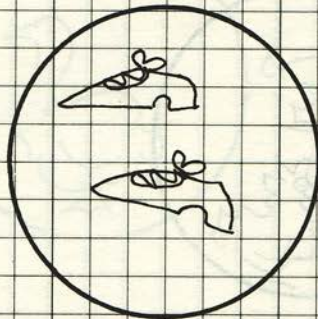
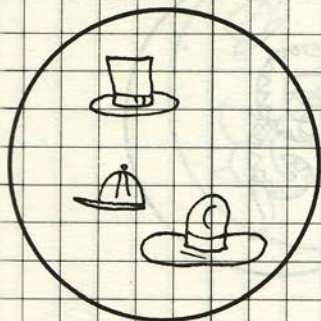
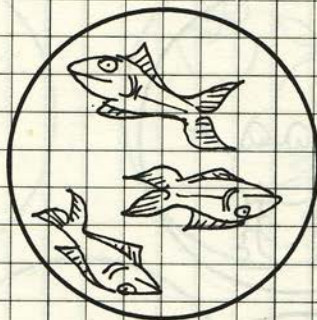

Dove ci sono più elementi?



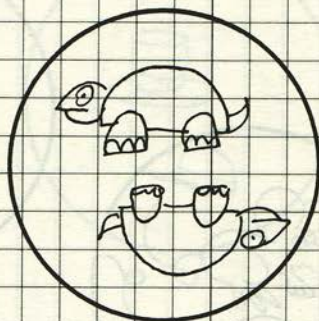

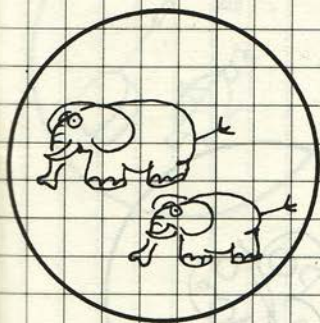
Dove ci sono meno elementi?



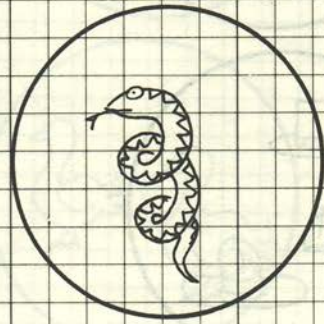



Unisci i cerchi dove c'è uno stesso numero di elementi.



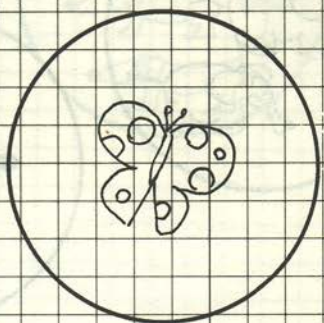

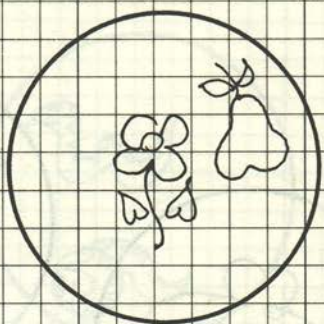
Unisci i cerchi dove c'è uno stesso numero di elementi.





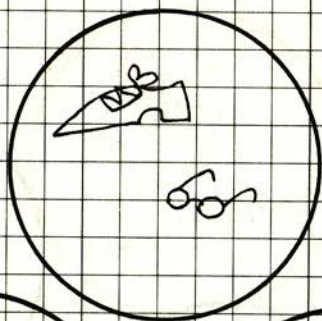

Unisci i cerchi dove c'è uno stesso numero di elementi.



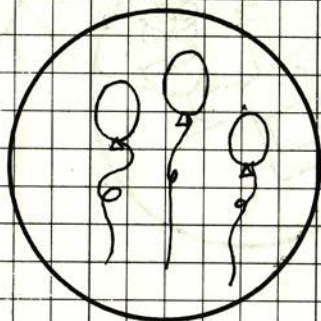
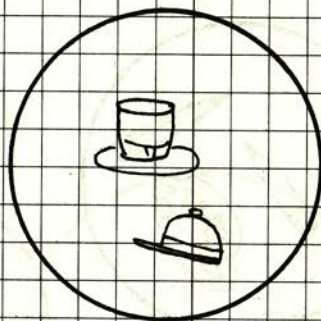

Unisci i cerchi dove c'è uno stesso numero di elementi.



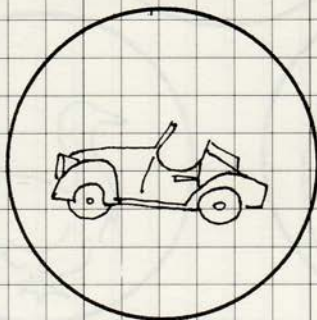
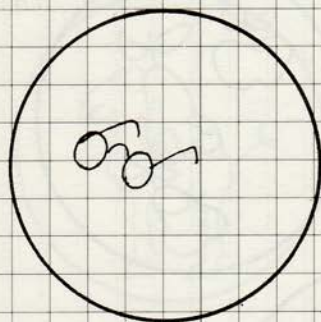
Colora un quadretto per ogni oggetto racchiuso nel cerchio.



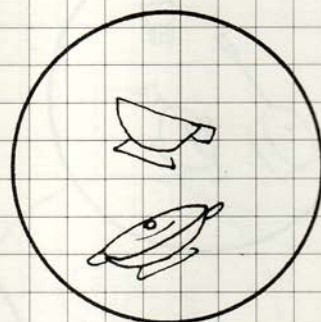

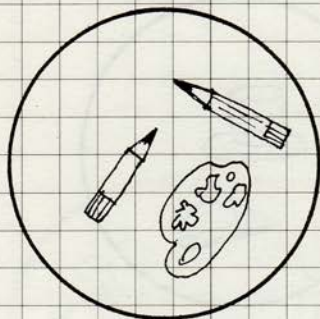
Colora un quadretto per ogni oggetto racchiuso nel cerchio.




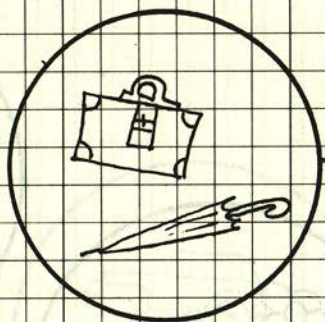

Colora un quadretto per ogni oggetto racchiuso nel cerchio.




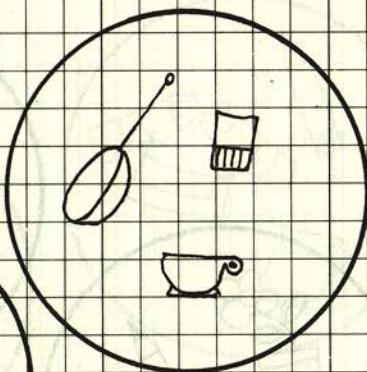
Colora un quadretto per ogni oggetto racchiuso nel cerchio.




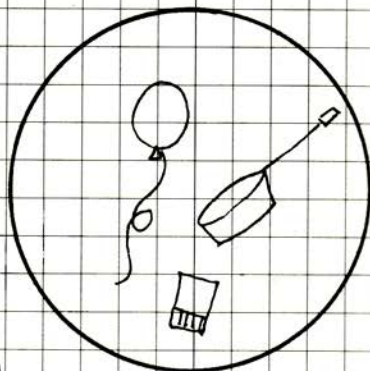

Colora un quadretto per ogni oggetto racchiuso nel cerchio.



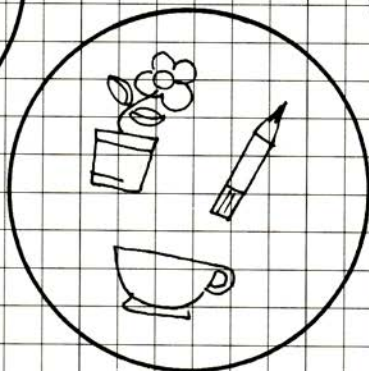
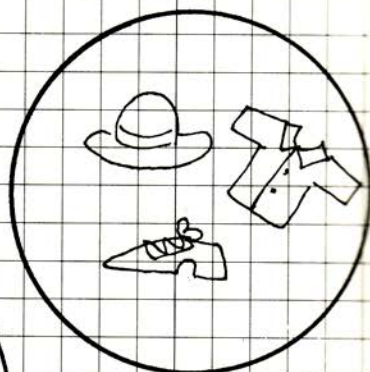

Colora un quadretto per ogni oggetto racchiuso nel cerchio.



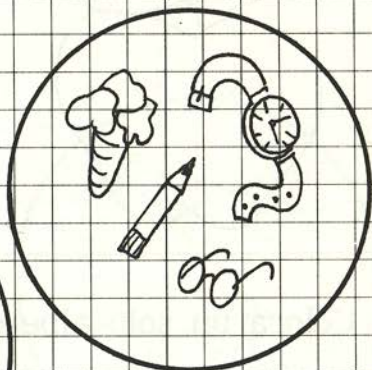

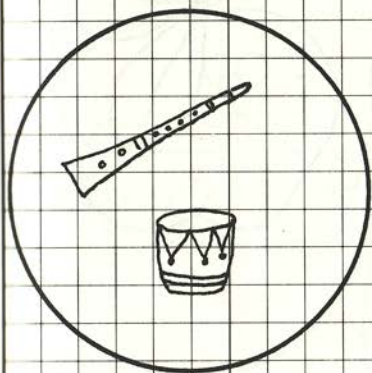
Colora un quadretto per ogni oggetto racchiuso nel cerchio.




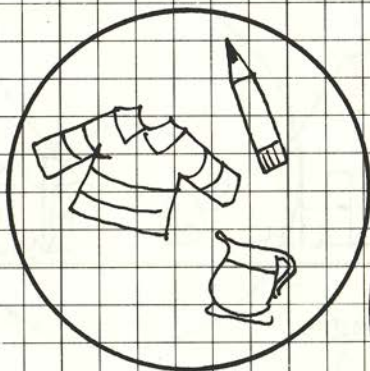
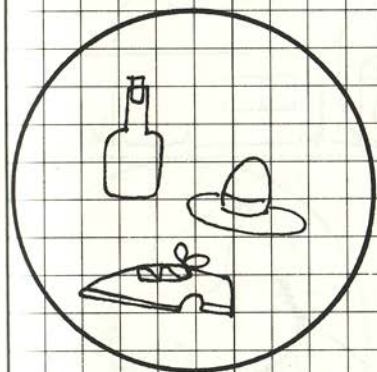
Colora un quadretto per ogni oggetto racchiuso nel cerchio.



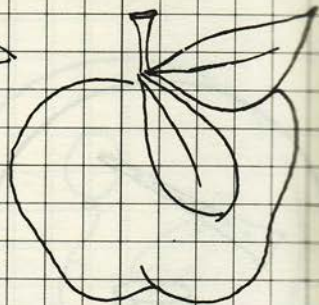
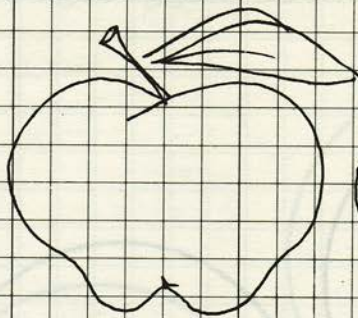

Colora un quadretto per ogni oggetto racchiuso nel cerchio.




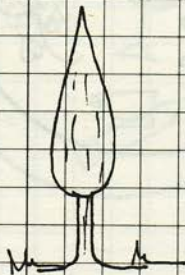
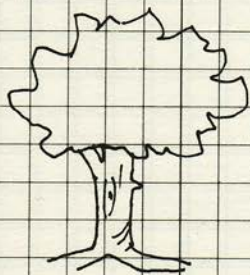
Colora un quadretto per ogni oggetto racchiuso nel cerchio.



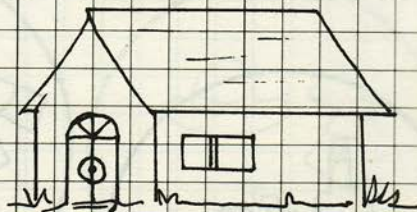
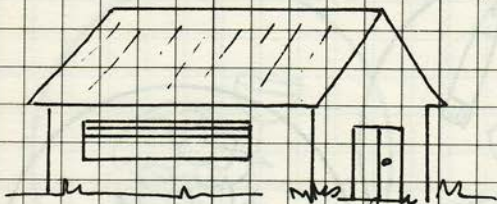
Colora una sola mela.



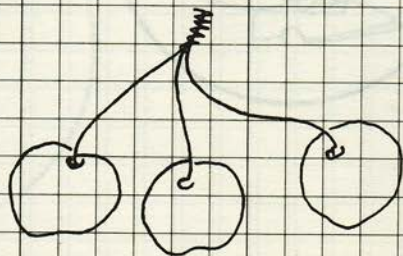
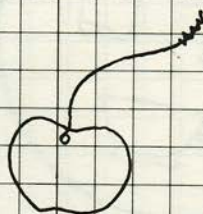
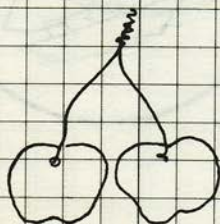
Colora un solo albero.





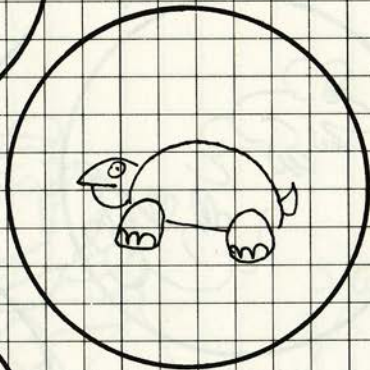

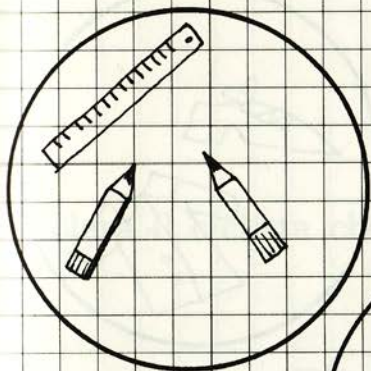
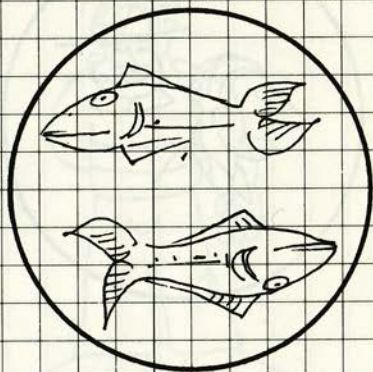


Colora una sola casetta.






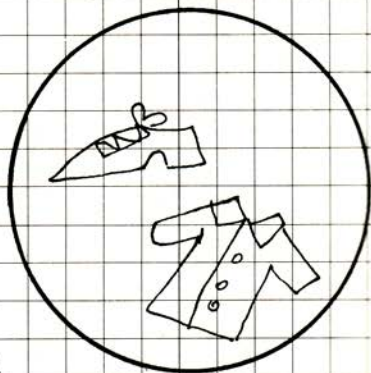
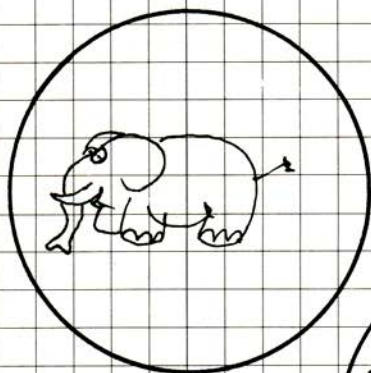



Colora una sola ciliegia.




Fai una crocetta sotto il cerchio che contiene un solo elemento.



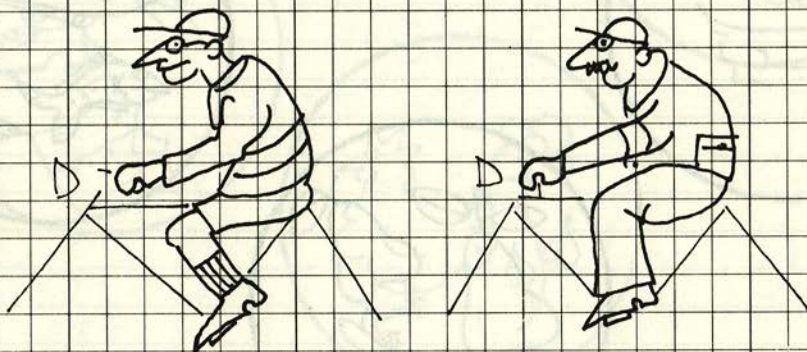
Fai una crocetta sotto il cerchio che contiene un solo elemento.



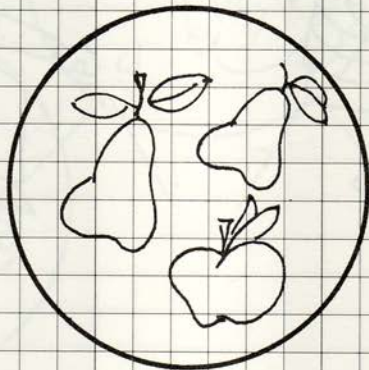
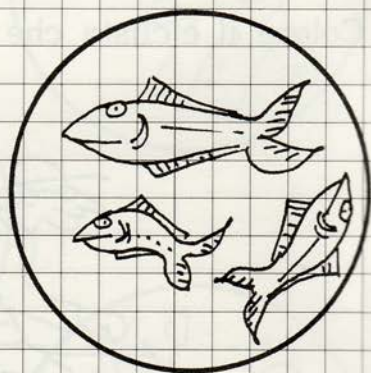

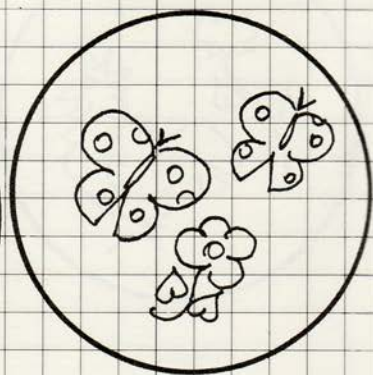
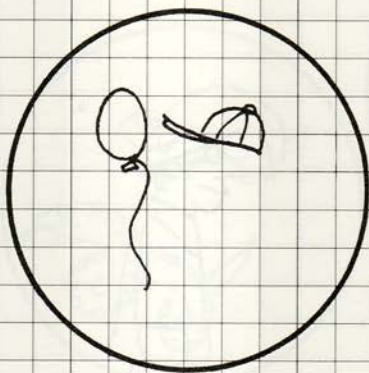
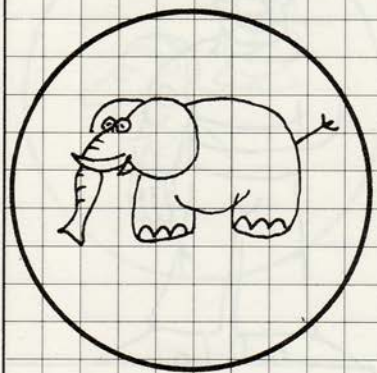
Colora il bambino che è sul primo gradino.




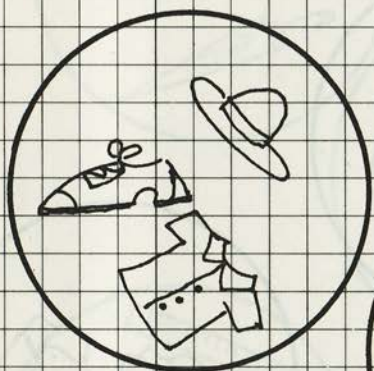

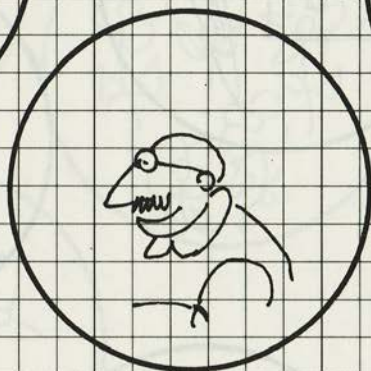
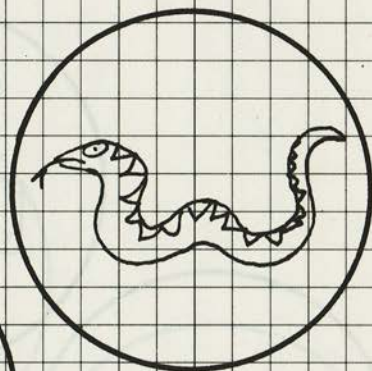

Colora il ciclista che è primo.



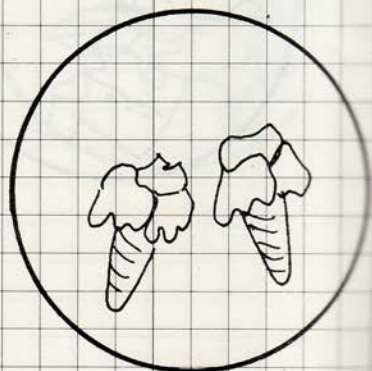

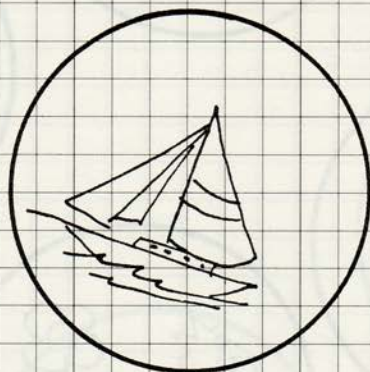


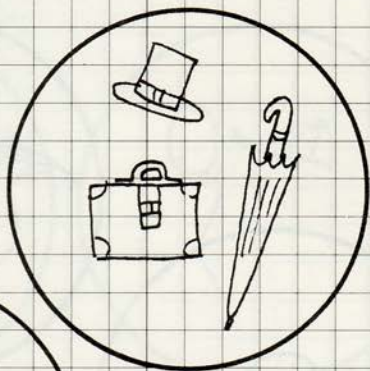
Fai una crocetta sotto il cerchio che contiene due elementi.



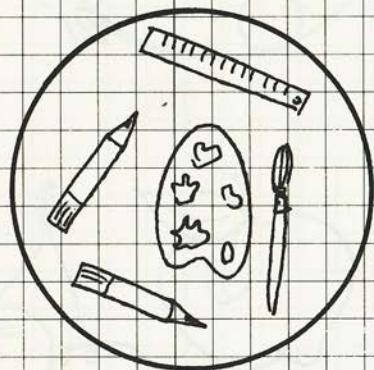
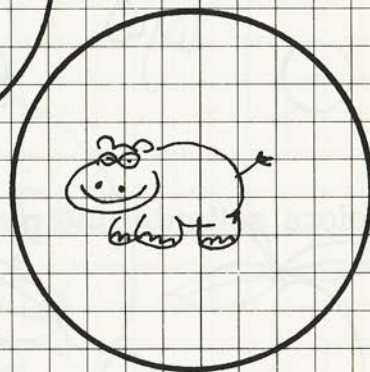
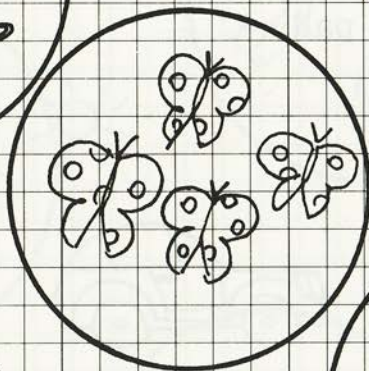



Fai una crocetta sotto il cerchio che contiene due elementi.




Fai una crocetta sotto il cerchio che contiene due elementi.




Fai una crocetta sotto il cerchio che contiene più elementi.




Colora soltanto due soldatini.



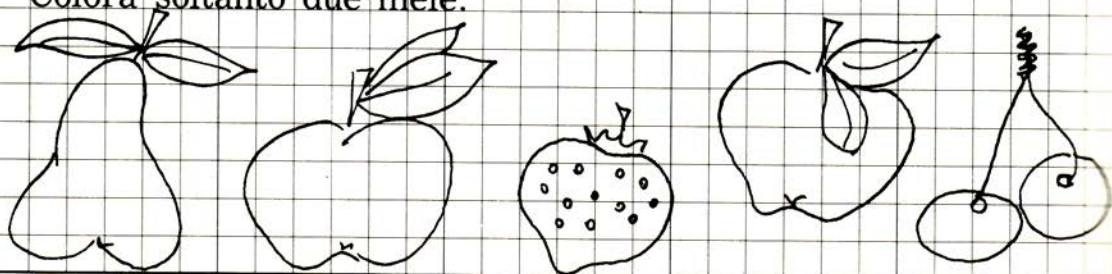
Colora soltanto due pulcini.




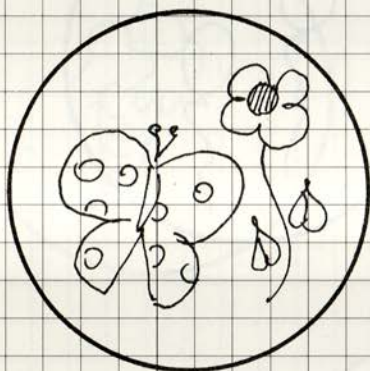
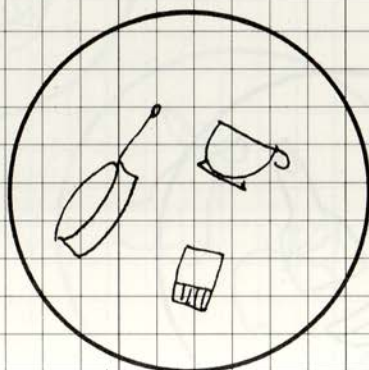


Colora soltanto due palline.




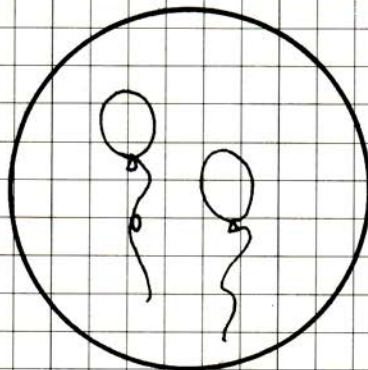
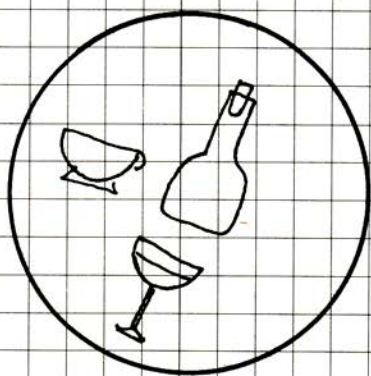


Colora soltanto due mele.



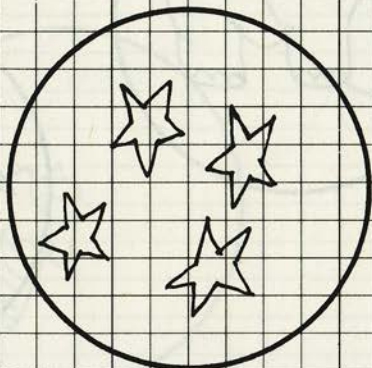


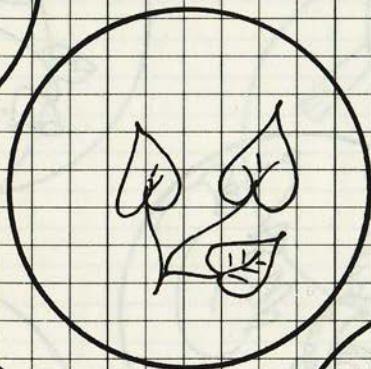
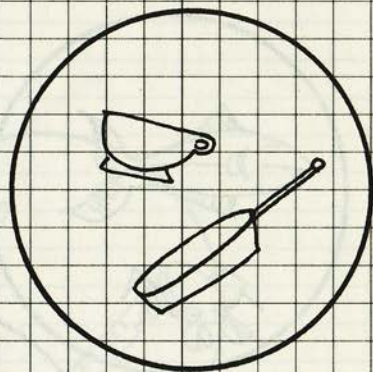

Fai una crocetta sotto il cerchio che contiene tre elementi.



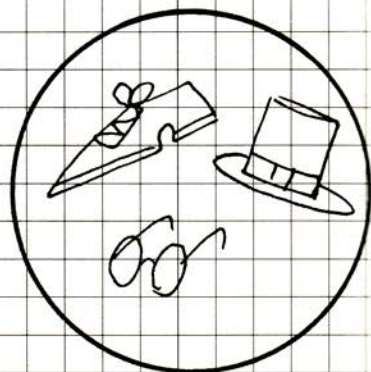
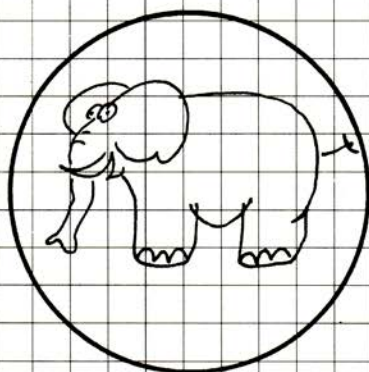
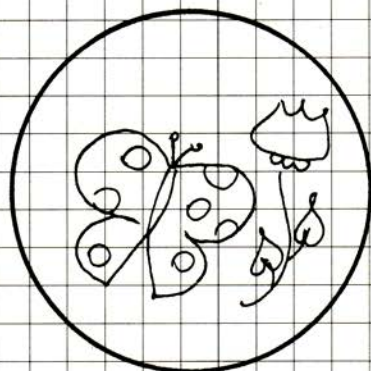

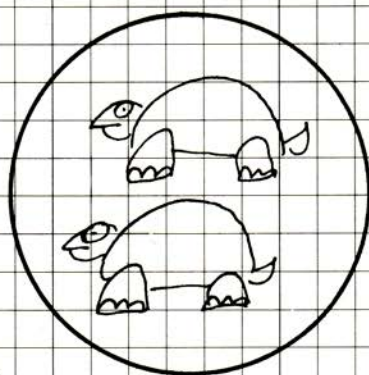
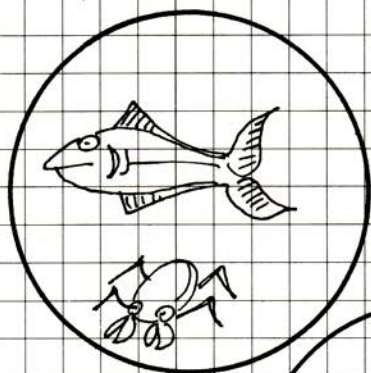
Fai una crocetta sotto il cerchio che contiene tre elementi.



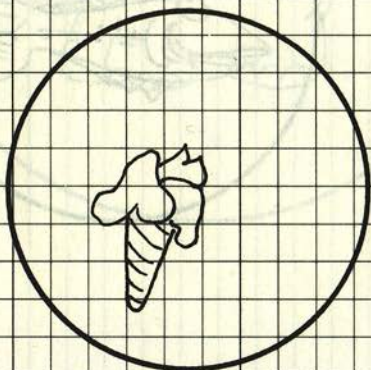
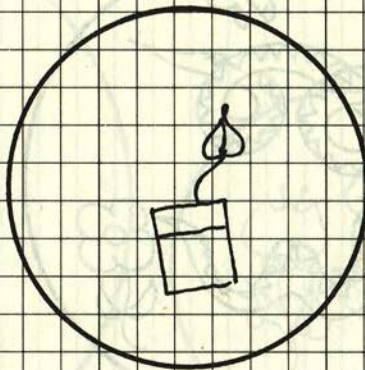
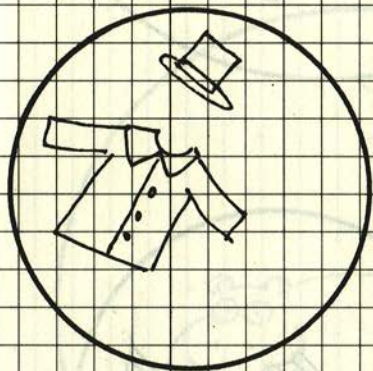
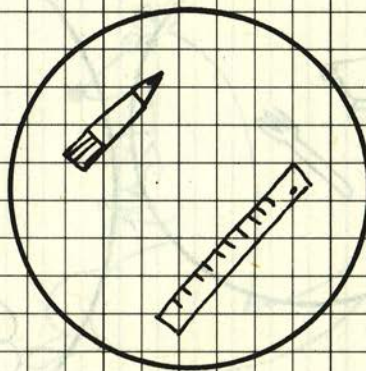
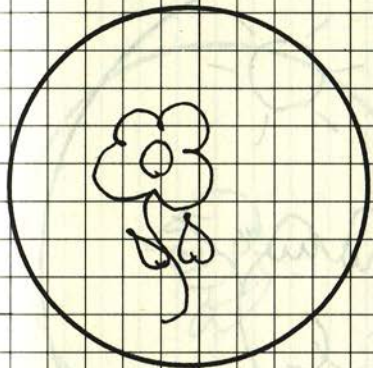
Fai una crocetta sotto il cerchio che contiene tre elementi.



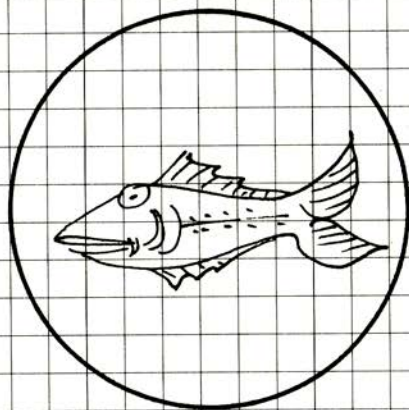
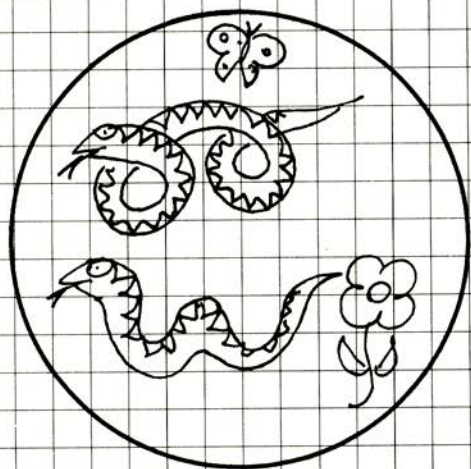

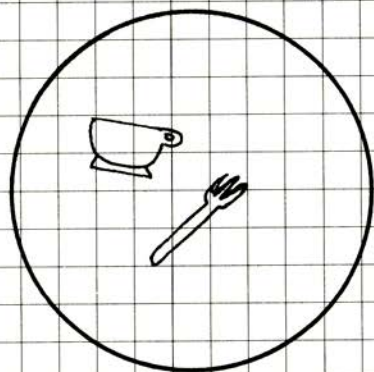
Fai una crocetta sotto il cerchio che contiene tre elementi.






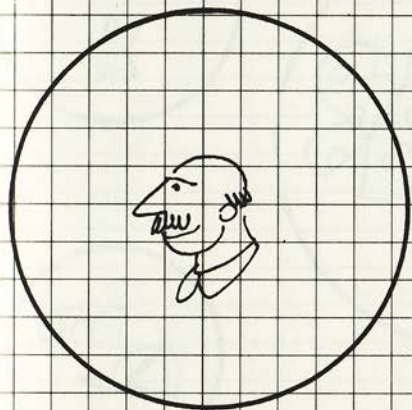
Completa ogni cerchio facendo in modo che ci siano sempre tre elementi.



Fai una crocetta sotto il cerchio che contiene più elementi.
Chi ne contiene tre?



Completa ogni cerchio in modo che ci siano sempre tre elementi.



Colora un quadretto.
Colora un altro quadretto.
Colora un altro quadretto.

Hai colorato... quadretti.

Disegna una pallina.
Disegna un'altra pallina.
Disegna un'altra pallina.

Hai colorato... palline.

$$1 + 1 + 1 =$$

$$2 + 1 =$$

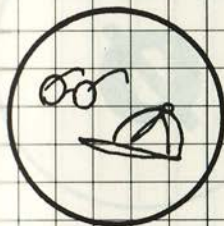



$$1 + 2 =$$

$$3 - 1 =$$

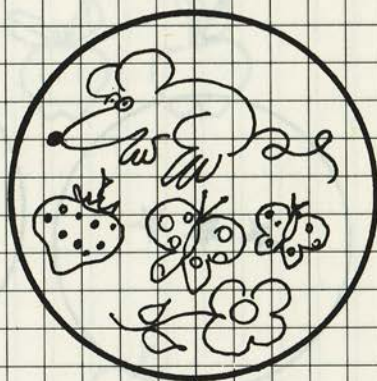
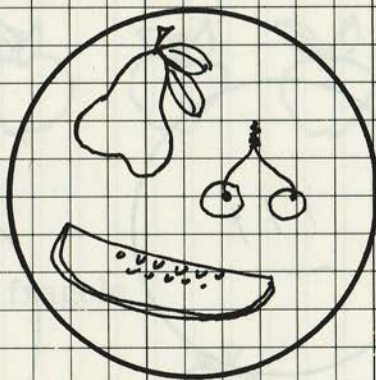
$$3 - 2 =$$

$$3 - 3 =$$

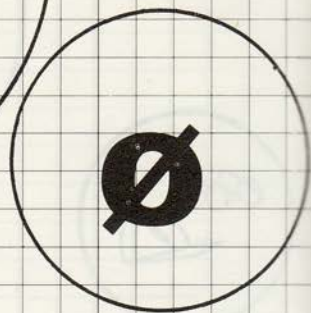
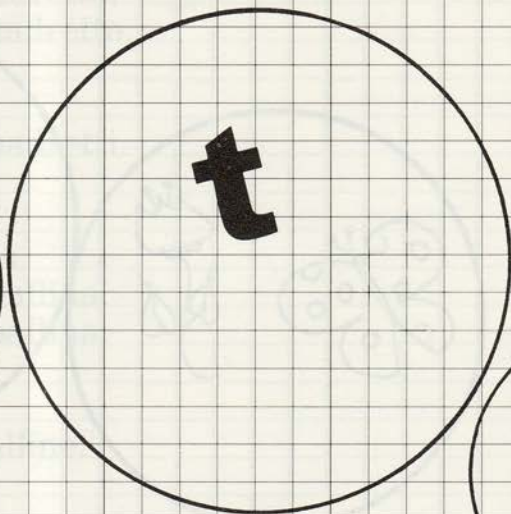
Fai una crocetta sotto il cerchio che contiene 4 elementi.



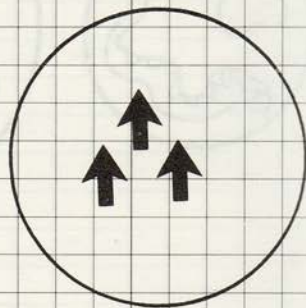
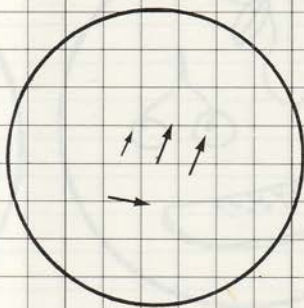
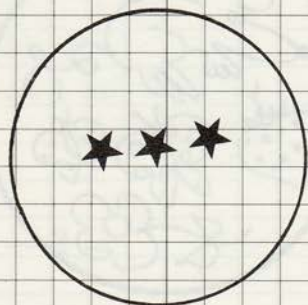
Fai una crocetta sotto il cerchio che contiene più elementi.
Chi ne contiene 4?





Fai una crocetta sotto il cerchio che contiene 4 elementi.



Completa ogni cerchio facendo in modo che ci siano sempre 4 elementi.




Fai una crocetta sotto il cerchio che contiene 4 elementi.



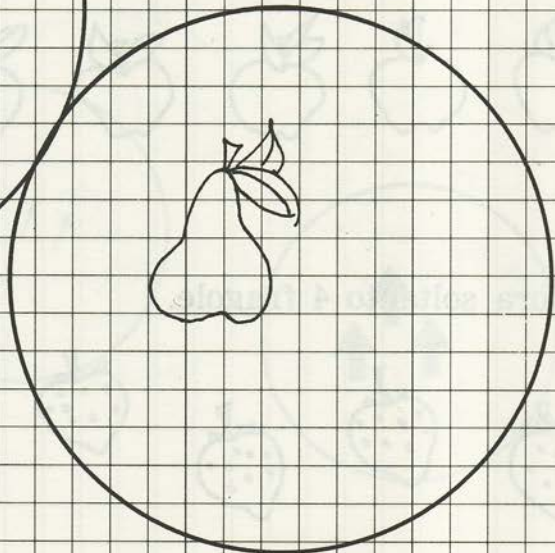
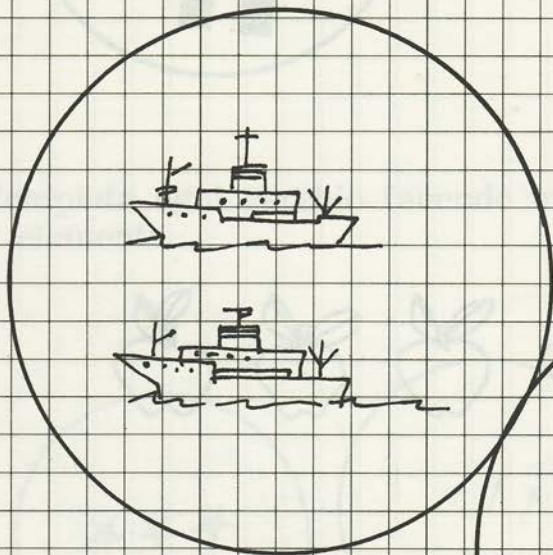
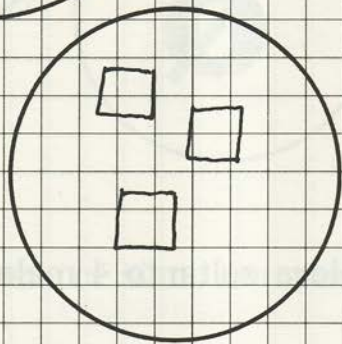


Colora soltanto 4 mele.



Colora soltanto 4 fragole.



Completa ogni cerchio facendo in modo che ci siano sempre 4 elementi.



Colora un quadretto. E un altro quadretto. E un altro quadretto. E un altro quadretto.

Quante volte hai colorato un quadretto?

$$1 + 1 + 1 + 1 =$$

Colora due quadretti. Colora altri due quadretti. Quante volte hai colorato due quadretti?

$$2 + 2 =$$

$$2 + 1 + 1 =$$

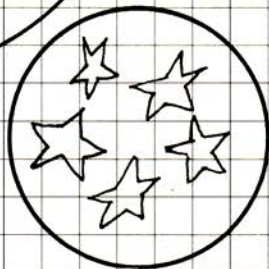

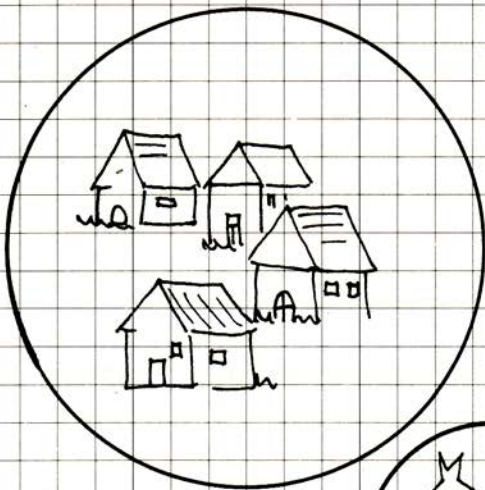
$$3 + 1 =$$

$$1 + 2 + 1 =$$


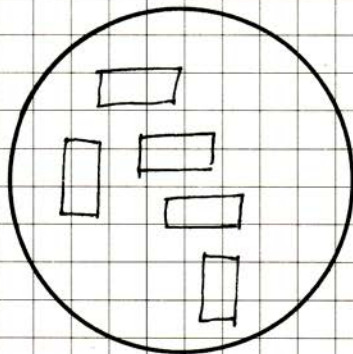
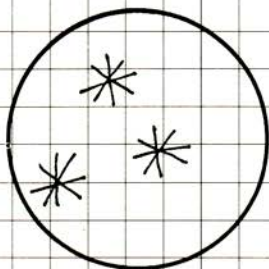
$$1 + 3 =$$

$$1 + 1 + 1 + 1 =$$

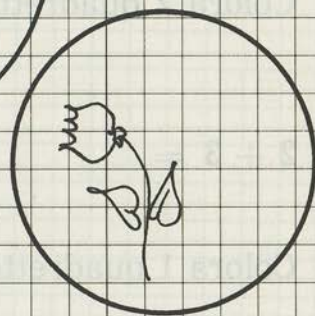

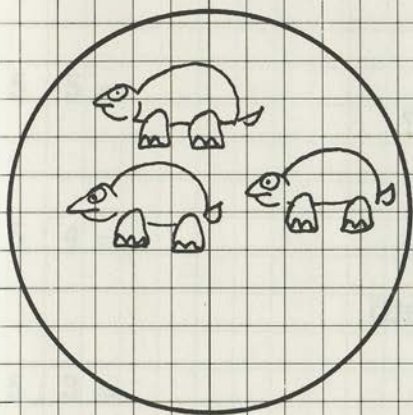
Fai una crocetta sotto il cerchio che contiene 5 elementi.



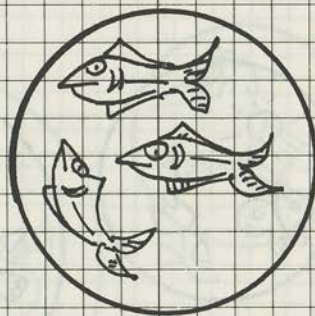

Fai una crocetta sotto il cerchio che contiene 5 elementi.



Fai una crocetta sotto il cerchio che contiene più elementi. Chi ne contiene 5?



Completa ogni cerchio facendo in modo che ci siano sempre 5 elementi.



Colora un quadretto. E un altro quadretto. E un altro quadretto. E un altro quadretto. E un altro quadretto.

Quante volte hai colorato un quadretto?

$$1 + 1 + 1 + 1 + 1 =$$

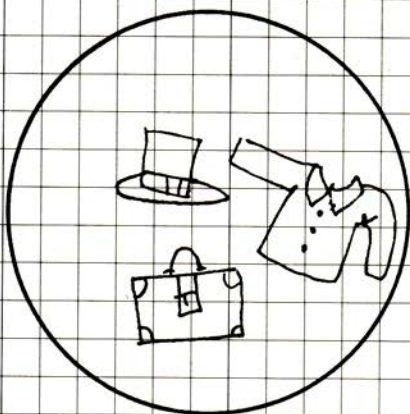


Colora 2 quadretti. Poi colora 3 quadretti.

$$2 + 3 =$$

Colora 1 quadretto. Ora colora 4 quadretti.

$$1 + 4 =$$

Completa ogni cerchio facendo in modo che ci siano sempre 5 elementi.



Completa:

$$5 : 5 =$$

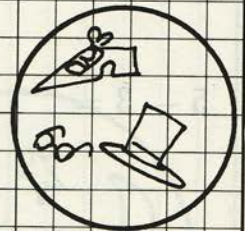
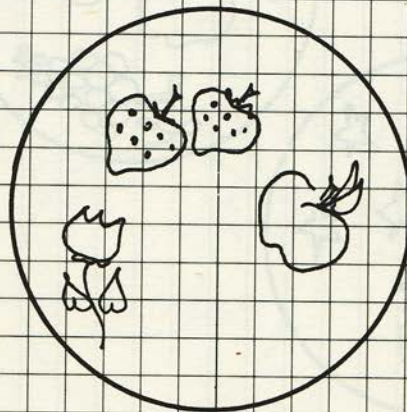
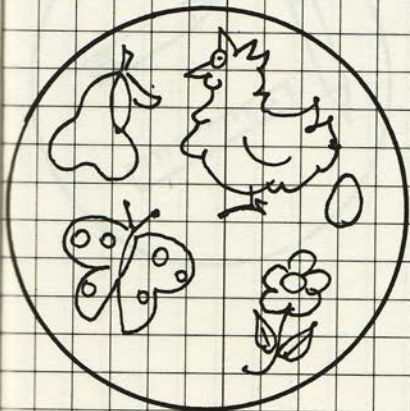
$$5 : 4 =$$

$$5 : 3 =$$

$$5 : 2 =$$

$$5 : 1 =$$

Fai una crocetta sotto il cerchio che contiene 5 elementi.



Completa:

$1 + 4 =$

$2 + 3 =$

$3 + 2 =$

$4 + 1 =$

$5 - 1 =$



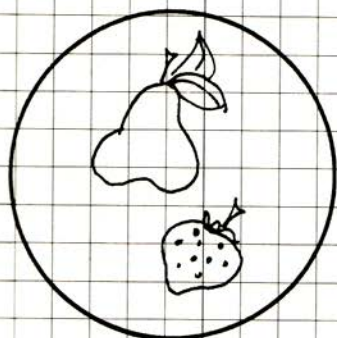
$5 - 2 =$

$5 - 3 =$


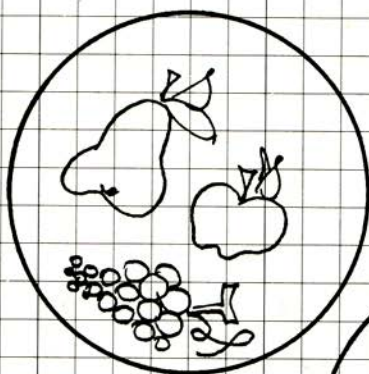
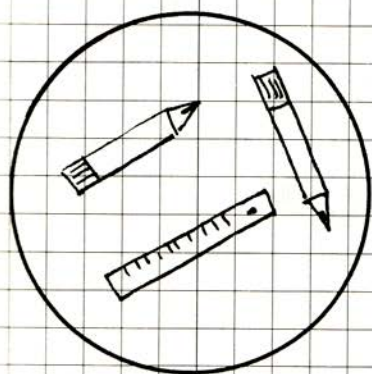
$5 - 4 =$

$5 - 5 =$

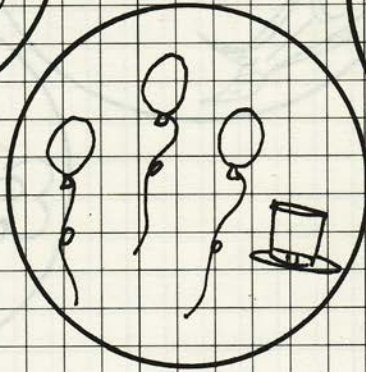


Fai una crocetta sotto il cerchio che contiene 6 elementi.



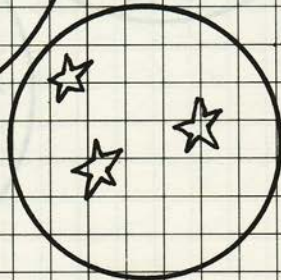
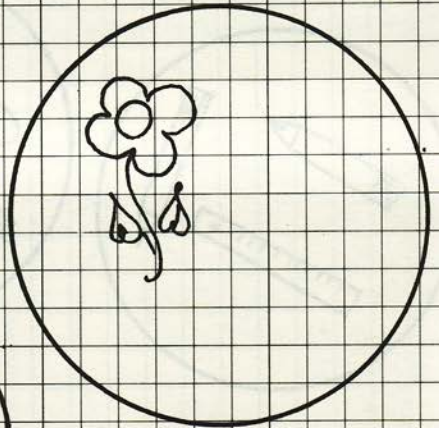

Fai una crocetta sotto il cerchio che contiene 6 elementi.



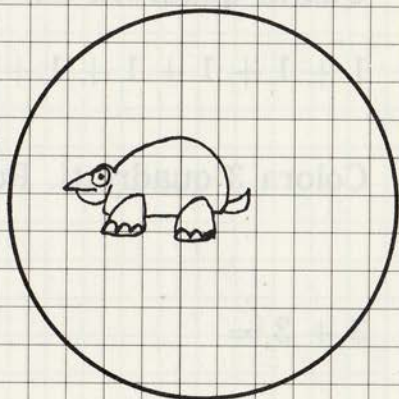


Fai una crocetta sotto il cerchio che contiene 6 elementi.






Completa ogni cerchio facendo in modo che ci siano sempre 6 elementi.



Completa ogni cerchio facendo in modo che ci siano sempre 6 elementi.



Fai una crocetta sotto il cerchio che contiene più elementi.
Chi ne contiene 6?



Colora un quadretto. E un altro quadretto. E un altro quadretto. E un altro quadretto. E un altro quadretto. E un altro quadretto ancora.

Quanti quadretti hai colorato?

$$1 + 1 + 1 + 1 + 1 + 1 =$$


Colora 3 quadretti. Poi colora altri 3 quadretti.

$$3 + 3 =$$

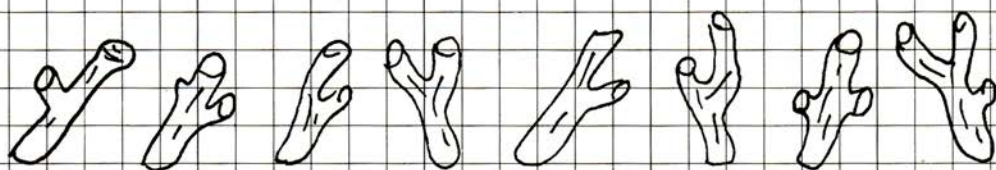
Colora 2 quadretti. Ora colora 4 quadretti.

$$2 + 4 =$$

Colora soltanto 6 mele.



Colora soltanto 6 bastoni.



Completa:



$6 : 6 =$

$6 : 5 =$

$6 : 4 =$

$6 : 3 =$

$6 : 2 =$

$6 : 1 =$

$6 : 0 =$

Completa:



$1 + 5 =$

$2 + 4 =$

$3 + 3 =$

$4 + 2 =$

$5 + 1 =$

$6 + 0 =$

$1 + 1 + 4 =$

$1 + 1 + 1 + 3 =$

$1 + 1 + 1 + 1 + 2 =$

Completa:

 $\uparrow \uparrow + \uparrow - \star \star \star$

$2 + 1 + 3 =$

$2 + 2 + 2 =$

$2 \times 3 =$

$2 + 2 =$

$2 \times 2 =$

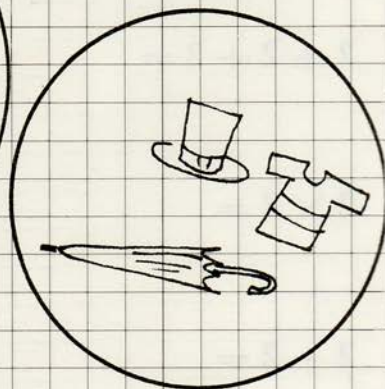

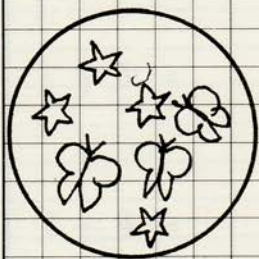
$3 \text{ volte } 2 =$

$2 \text{ volte } 3 =$



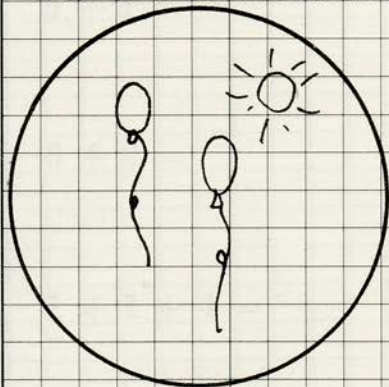
$6 \text{ volte } 1 =$

$1 \text{ volta } 6 =$

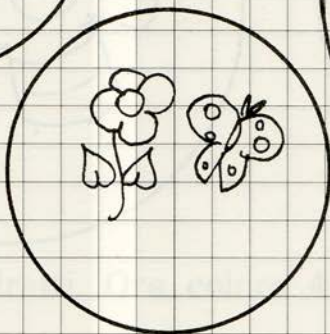
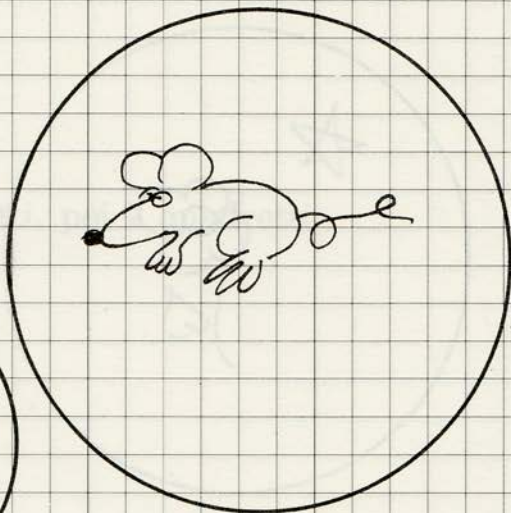

Fai una crocetta sotto il cerchio che contiene 7 elementi.



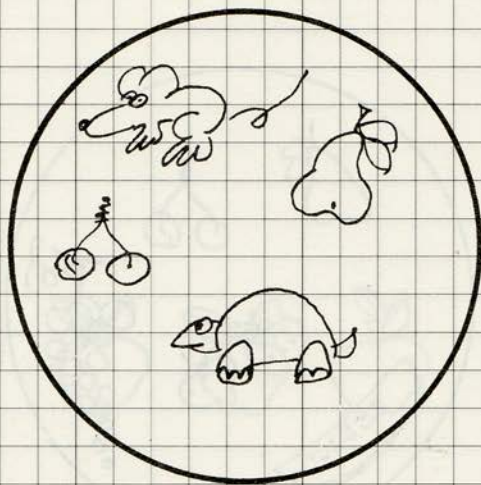

Fai una crocetta sotto il cerchio che contiene 7 elementi.



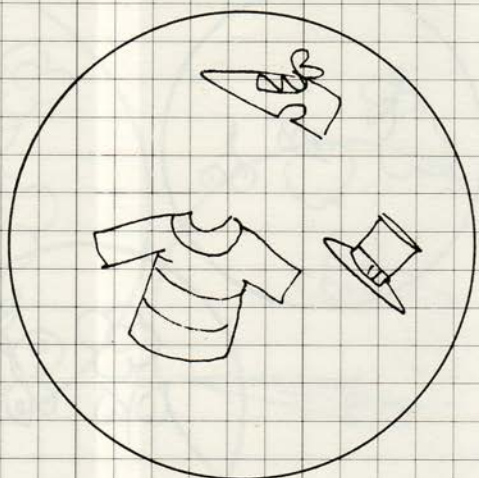
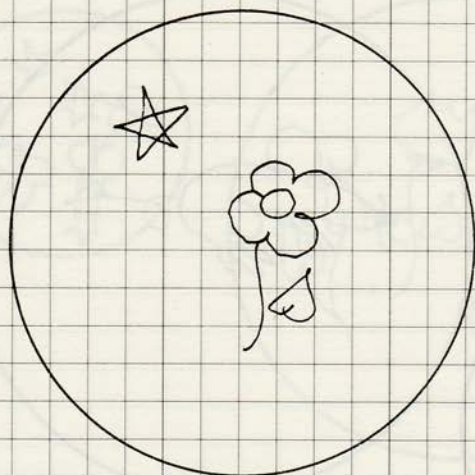
Completa ogni cerchio facendo in modo che ci siano sempre 7 elementi.



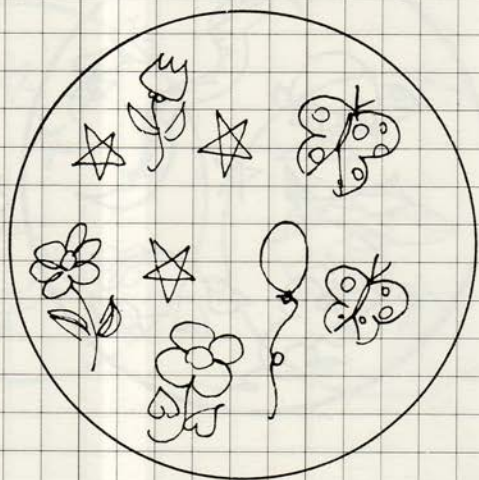
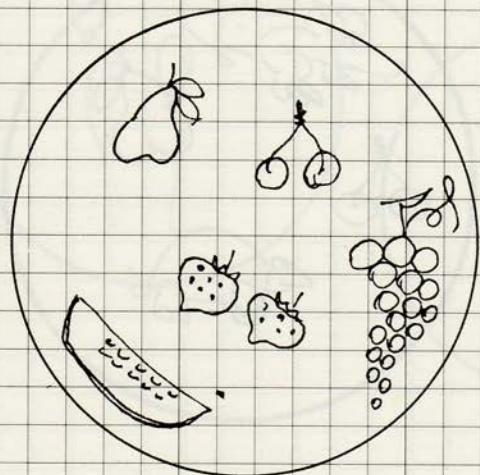
Fai una crocetta sotto il cerchio che contiene 7 elementi.



Completa ogni cerchio facendo in modo che ci siano sempre 7 elementi.



Fai una crocetta sotto un cerchio che contiene più elementi.
Chi ne contiene 7?



Colora sette quadretti.

Hai colorato:

$$1 + 1 + 1 + 1 + 1 + 1 + 1 =$$

Colora 2 quadretti, poi 3 quadretti, poi 2 quadretti.

Hai colorato:


$$2 + 3 + 2 =$$

Colora 3 quadretti. Ora colora 4 quadretti.

Hai colorato:

$$3 + 4 =$$

Colora soltanto 7 mele.



Colora soltanto 7 casette.



Completa:



$7 : 7 =$

$7 : 6 =$

$7 : 5 =$

$7 : 4 =$

$7 : 3 =$

$7 : 2 =$

$7 : 1 =$

$7 : 0 =$

Completa:

↑↑↑↑↑↑ +

$6 + 1 =$

$5 + 2 =$

$4 + 3 =$

$3 + 4 =$

$2 + 5 =$



$1 + 6 =$

$1 + 1 + 5 =$


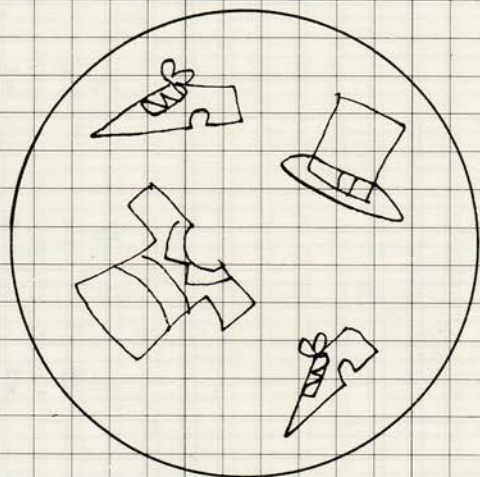
$1 + 1 + 1 + 4 =$

$1 + 1 + 1 + 1 + 3 =$

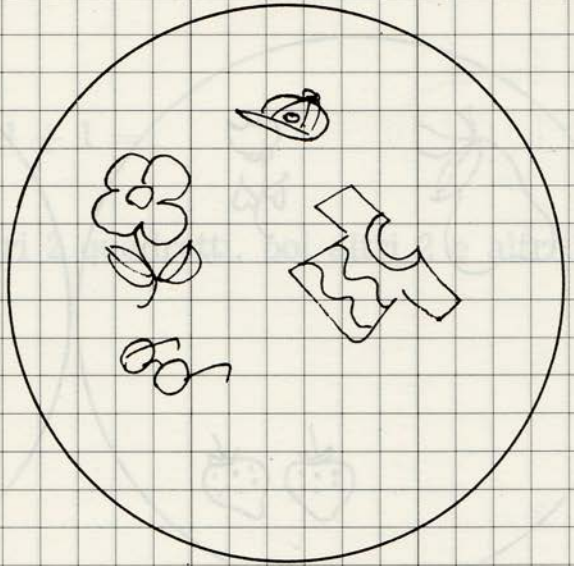

Fai una crocetta sotto il cerchio che contiene 8 elementi.





Fai una crocetta sotto il cerchio che contiene 8 elementi.



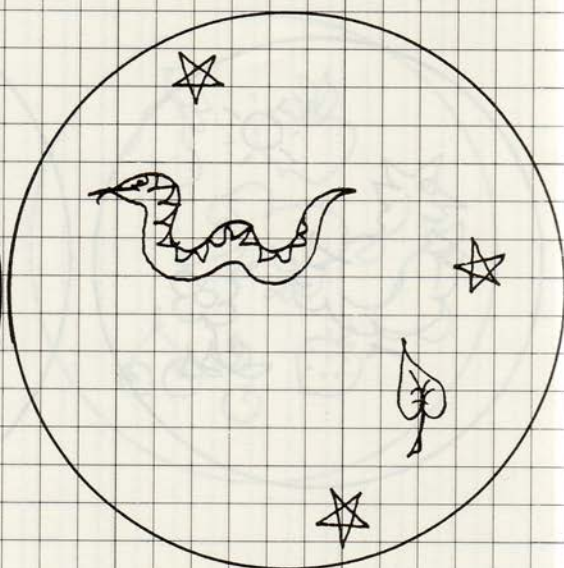
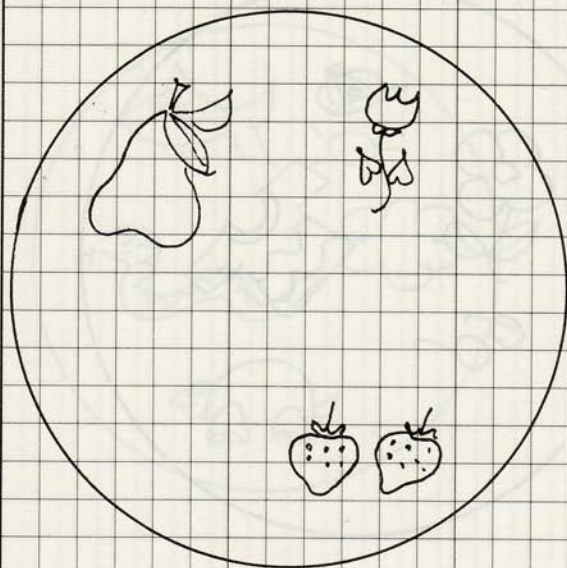
Completa ogni cerchio facendo in modo che ci siano sempre 8 elementi.



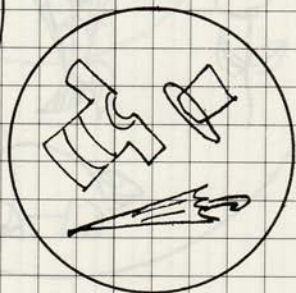


Fai una crocetta sotto il cerchio che contiene 8 elementi.



Completa ogni cerchio facendo in modo che ci siano sempre 8 elementi.



Fai una crocetta sotto il cerchio che contiene più elementi.
Chi ne contiene 8?



Colora 8 quadretti.

Hai colorato:

$$1 + 1 + 1 + 1 + 1 + 1 + 1 + 1 =$$

Colora 2 quadretti, poi altri 2 quadretti, poi altri 2 e altri 2.

Hai colorato:

$$2 + 2 + 2 + 2 =$$

Quante volte 2?

$$4 \times 2 =$$


Colora soltanto 8 palloncini.




Colora soltanto 8 casette.



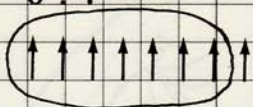
Colora soltanto 8 bastoni.



Completa:



$$8 : 7 =$$



$$8 : 6 =$$

$$8 : 5 =$$

$$8 : 3 =$$

$$8 : 1 =$$

$$8 : 4 =$$

$$8 : 2 =$$

$$8 : 8 =$$

$$8 : 0 =$$

Completa:

★ ★ ★ ★ ★ ★ ★

$7 + 1 =$

$6 + 2 =$

$5 + 3 =$

$4 + 4 =$

$3 + 5 =$

$2 + 6 =$

$1 + 7 =$

$8 + 0 =$

$2 + 2 + 2 + 2 =$

Completa:



$8 - 1 =$

$8 - 2 =$

$8 - 3 =$

$8 - 4 =$

$8 - 5 =$




$8 - 6 =$

$8 - 7 =$




$8 - 8 =$

$8 - 0 =$

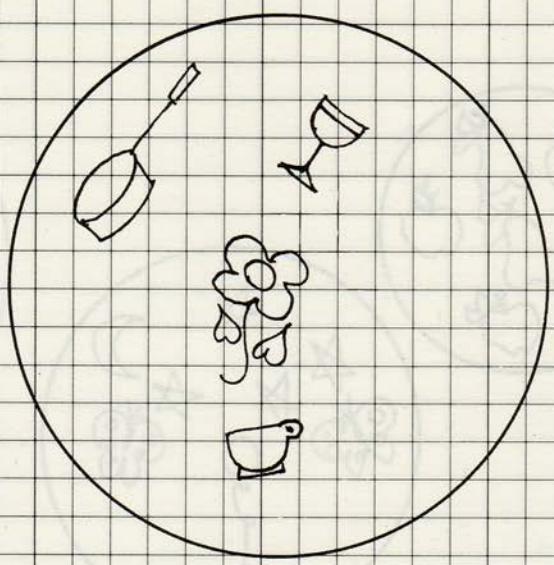
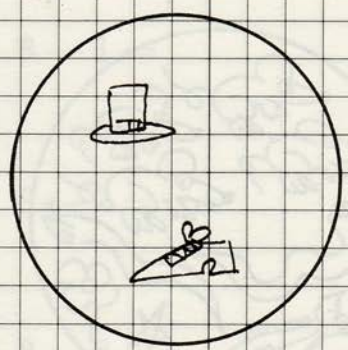
Fai una crocetta sotto il cerchio che contiene 9 elementi.



Fai una crocetta sotto il cerchio che contiene più elementi.
Chi ne contiene 9?




Completa ogni cerchio facendo in modo che ci siano sempre 9 elementi.



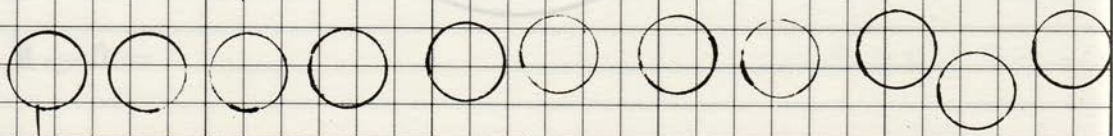
Colora soltanto 9 casette.



Colora soltanto 9 alberi.



Colora soltanto 9 palline.



Colora 9 quadretti.

Hai colorato:

$$1 + 1 + 1 + 1 + 1 + 1 + 1 + 1 + 1 =$$

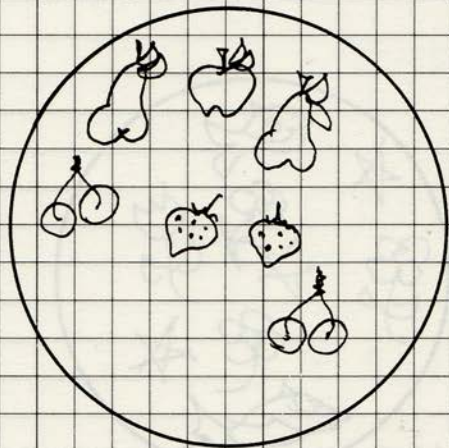
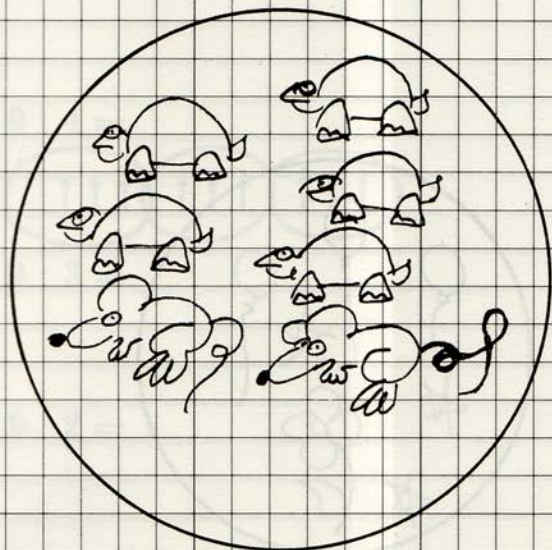
Colora 3 quadretti, poi altri 3, poi altri 3.

Hai colorato:

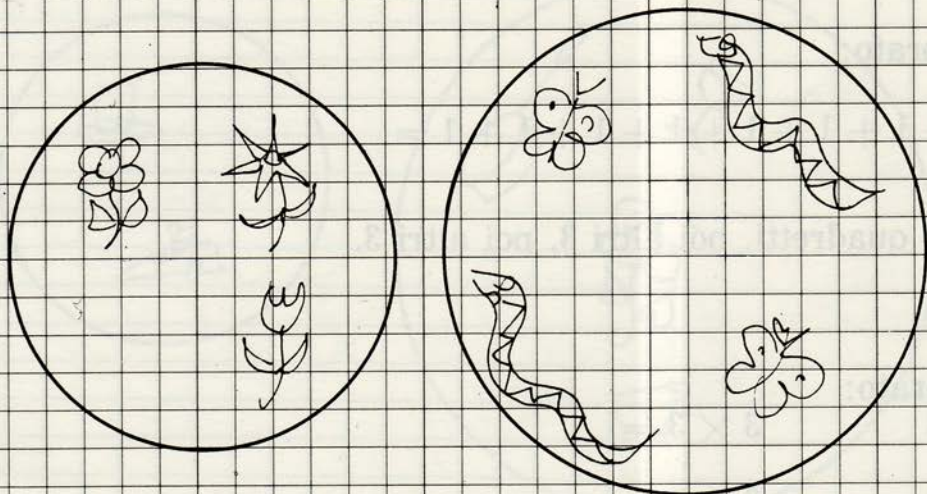
$$3 \text{ volte } 3 \quad 3 \times 3 =$$

$$3 \text{ volte } 2 \quad 3 \times 2 =$$

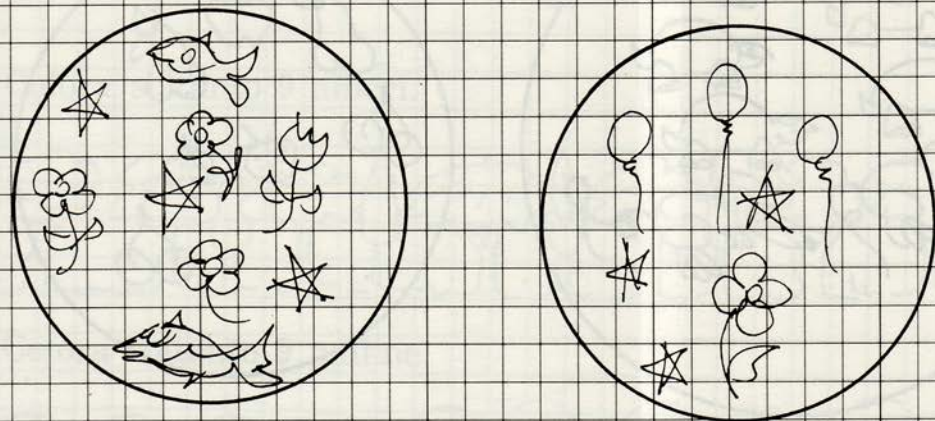
Fai una crocetta sotto il cerchio che contiene 9 elementi.



Completa ogni cerchio facendo in modo che ci siano sempre 9 elementi.



Fai una crocetta sotto il cerchio che contiene 9 elementi.



Completa:



$9 : 9 =$

$9 : 8 =$

$9 : 7 =$

$9 : 6 =$

$9 : 5 =$

$9 : 4 =$



$9 : 3 =$

$9 : 2 =$

$9 : 1 =$

Completa:



$8 + 1 =$

$7 + 2 =$

$6 + 3 =$

$5 + 4 =$

$4 + 5 =$

$3 + 6 =$

$2 + 7 =$

$1 + 8 =$

$9 + 0 =$

Completa:



$9 - 1 =$

$9 - 2 =$

$9 - 3 =$

$9 - 4 =$

$9 - 5 =$


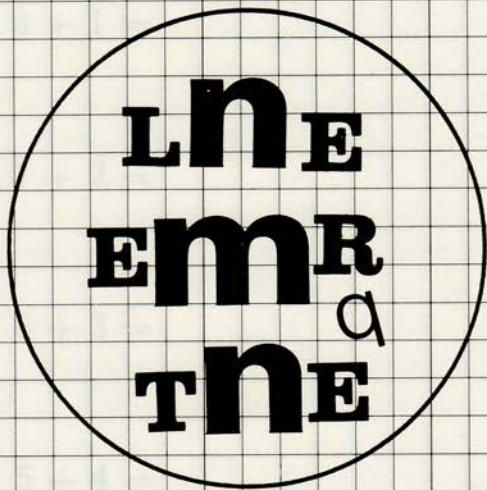
$9 - 6 =$

$9 - 7 =$

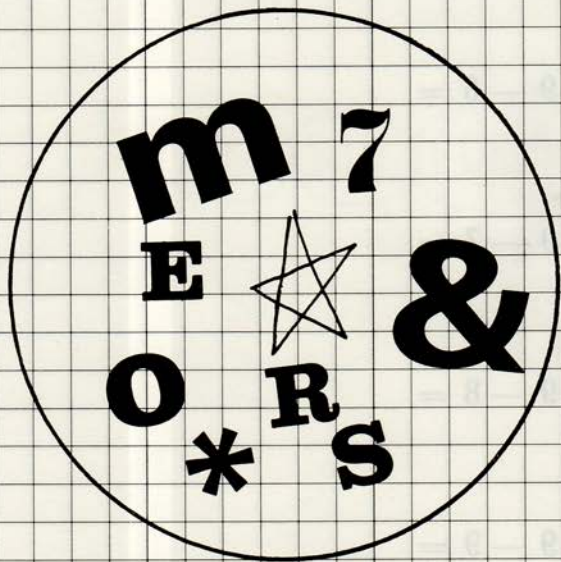
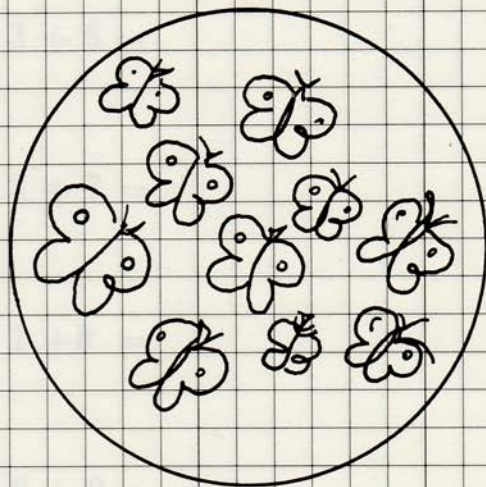
$9 - 8 =$

$9 - 9 =$

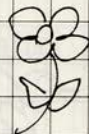
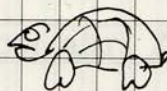

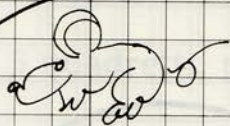
Fai una crocetta sotto il cerchio che contiene 10 elementi.



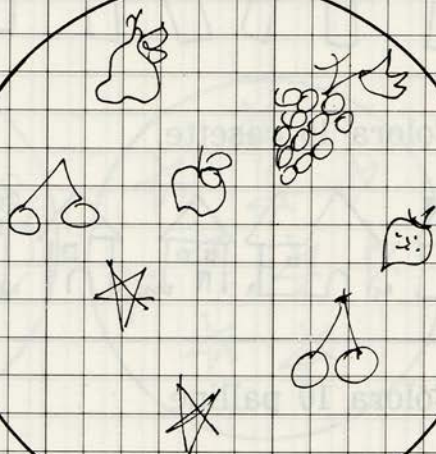
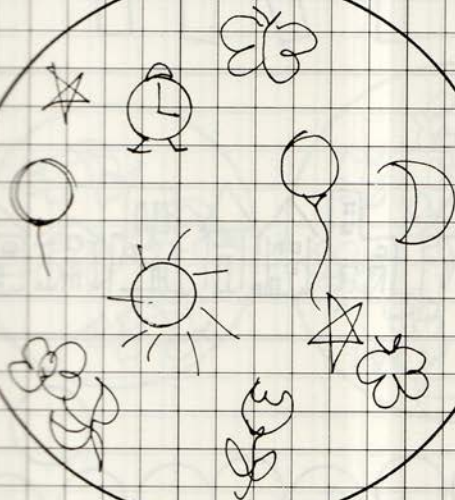
Fai una crocetta sotto il cerchio che contiene 10 elementi.



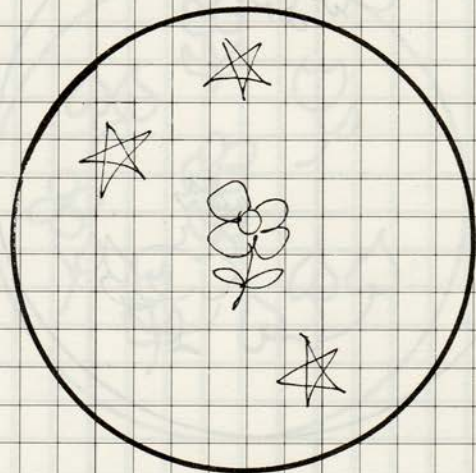
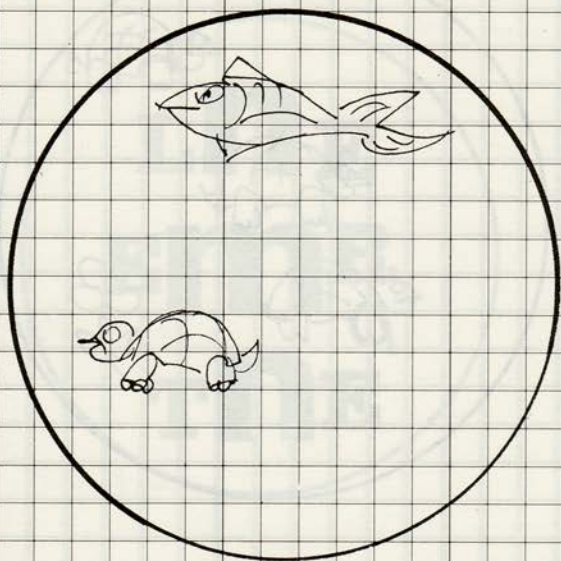
Completa ogni cerchio facendo in modo che ci siano sempre 10 elementi.



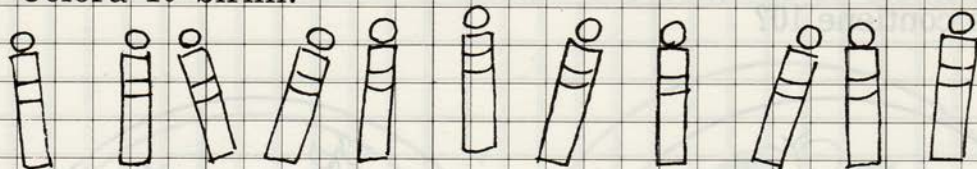
Fai una crocetta sotto il cerchio che contiene più elementi.
Chi ne contiene 10?



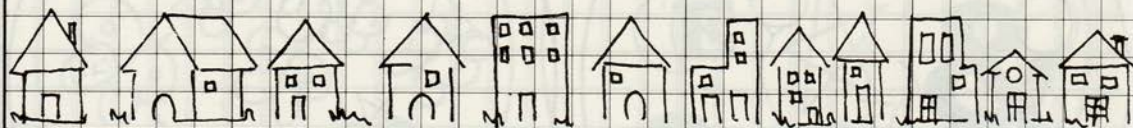
Completa ogni cerchio facendo in modo che ci siano sempre 10 elementi.



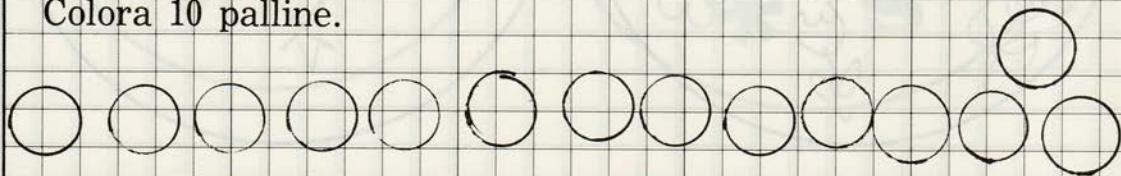
Colora 10 birilli.



Colora 10 casette.



Colora 10 palline.



Colora 10 quadretti. Hai colorato:

$$1 + 1 + 1 + 1 + 1 + 1 + 1 + 1 + 1 + 1 =$$

Colora 5 quadretti, poi altri 5.

Hai colorato: $5 + 5 =$

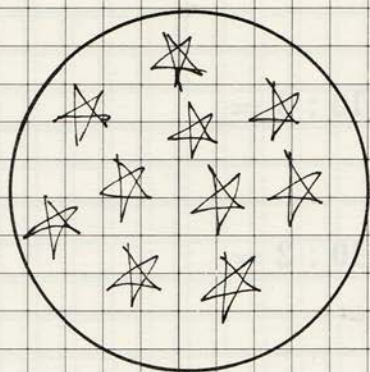


Colora 2 quadretti, poi 2, poi altri 2, poi altri 2, poi altri 2.

Quante volte 2 quadretti?

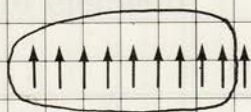
5 volte 2 quadretti

$$5 \times 2 =$$

Fai una crocetta sotto il cerchio che contiene 10 elementi.



Completa:



$10 : 9 =$

$10 : 8 =$

$10 : 7 =$

$10 : 6 =$

$10 : 5 =$

$10 : 4 =$

$10 : 3 =$

$10 : 2 =$

$10 : 1 =$

Completa:



$9 + 1 =$

$8 + 2 =$

$7 + 3 =$

$6 + 4 =$

$5 + 5 =$

$4 + 6 =$

$3 + 7 =$

$2 + 8 =$

$1 + 9 =$

Completa:



$10 - 2 =$

$10 - 3 =$

$10 - 4 =$

$10 - 5 =$

$10 - 6 =$

$10 - 7 =$

$10 - 8 =$

$10 - 9 =$

$10 - 10 =$

Quante volte devi disegnare una pallina per averne 10?

Disegnale:

Quante volte devi disegnare una foglia per averne 10?

Disegnale:

Quante volte devi disegnare dei puntini per averne 10?


Disegnali:

Quante volte devi colorare un quadretto per averne 10?

Colorali:

Fai i disegni e completa:

esempio:



Quante volte puoi levare 1 pallina da 10 palline?

Dieci volte

Quante volte puoi levare 2 palline da 10 palline?

Quante volte puoi levare 3 fiori da 10 fiori?

Quante volte puoi levare 5 stecchini da 10 stecchini?

Completa:

Da 2 a 10 manca

Da 5 a 10 manca

Da 3 a 10 manca

Da 9 a 10 manca

Da 7 a 10 manca

Da 1 a 10 manca

Da 6 a 10 manca

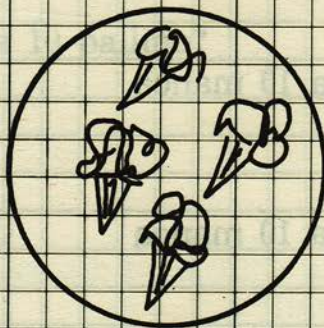
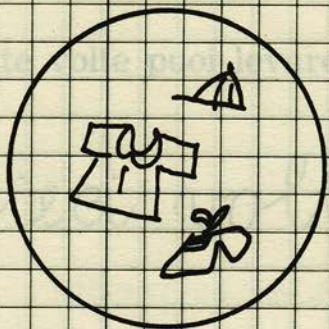
Da 4 a 10 manca

Da 8 a 10 manca

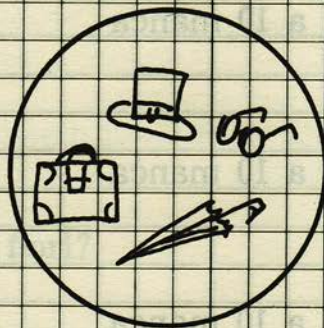
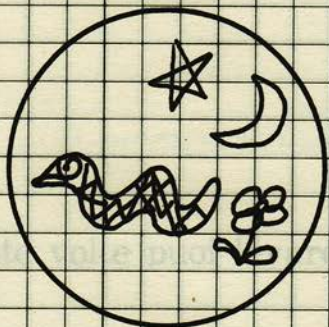
Da 10 a 10 manca

Quanti elementi sono in un cerchio? Unisci il cerchio al numero corrispondente.

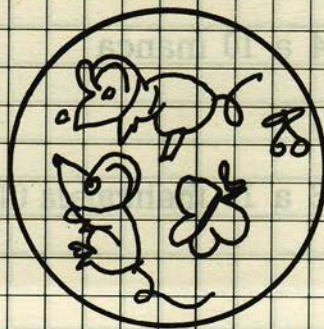
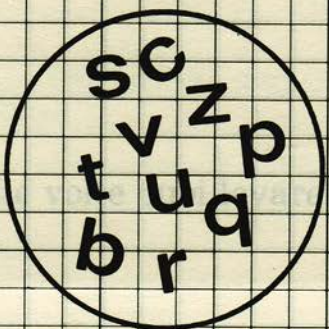
1 2 3 4 5 6 7 8 9 10



1 2 3 4 5 6 7 8 9 10

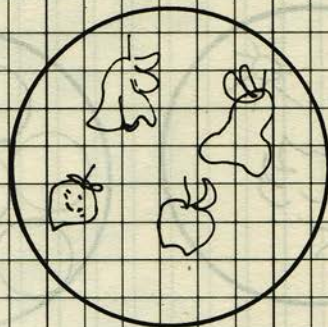
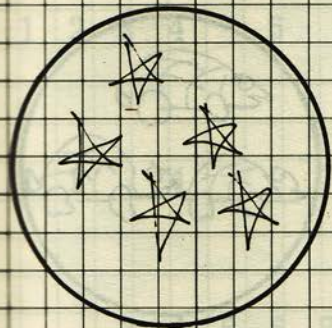


1 2 3 4 5 6 7 8 9 10

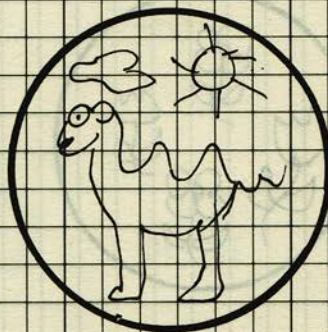
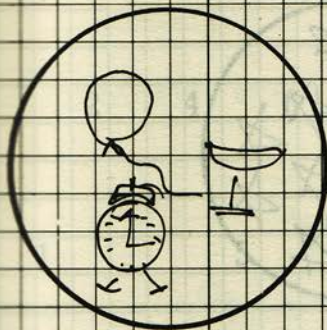


Quanti elementi sono in un cerchio? Unisci il cerchio al numero corrispondente.

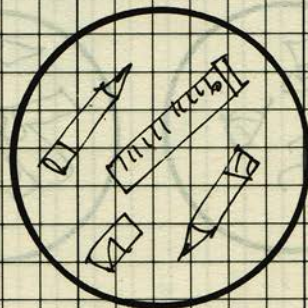
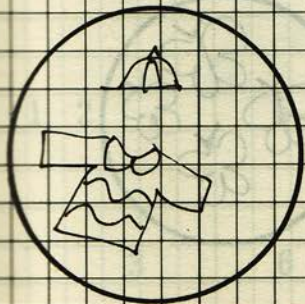
1 2 3 4 5 6 7 8 9 10



1 2 3 4 5 6 7 8 9 10

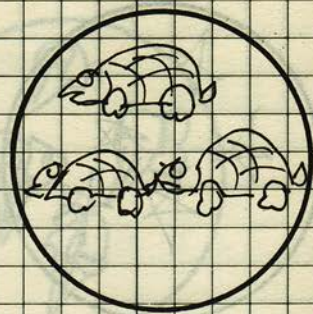
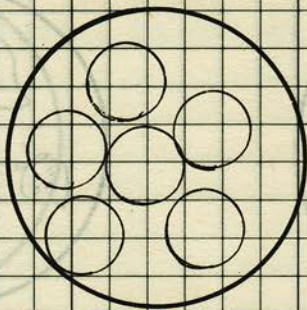
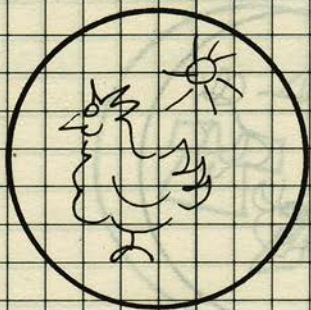


1 2 3 4 5 6 7 8 9 10

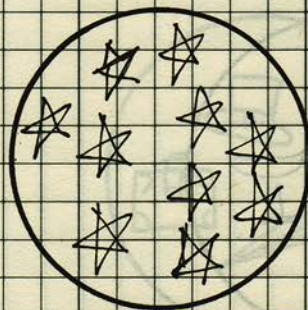
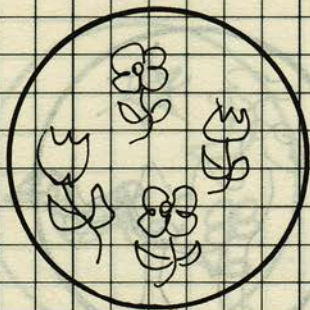


Quanti elementi sono in un cerchio? Unisci il cerchio al numero corrispondente.

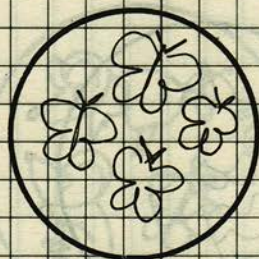
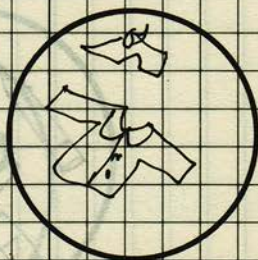
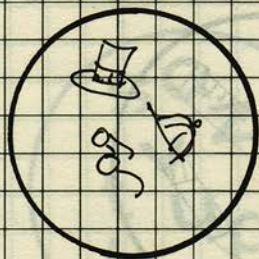
1 2 3 4 5 6 7 8 9 10



1 2 3 4 5 6 7 8 9 10



1 2 3 4 5 6 7 8 9 10



Che numero manca?

1 2 3 4 6 8 9 10

1 2 4 7 9 10

3 4 5 6 7 8

1 3 5 7 9 10

2 4 6 8 10

1 5 9

1 9

1 2 6 10

3 6 9

Fai un cerchietto attorno al numero più grande.

5 8 9 5

6 2 7 1

8 5 2 8

4 6 5 9

10 2 8 1

5 10 10 10

1 3 5 6

7 5 9 10

7 8 2 0

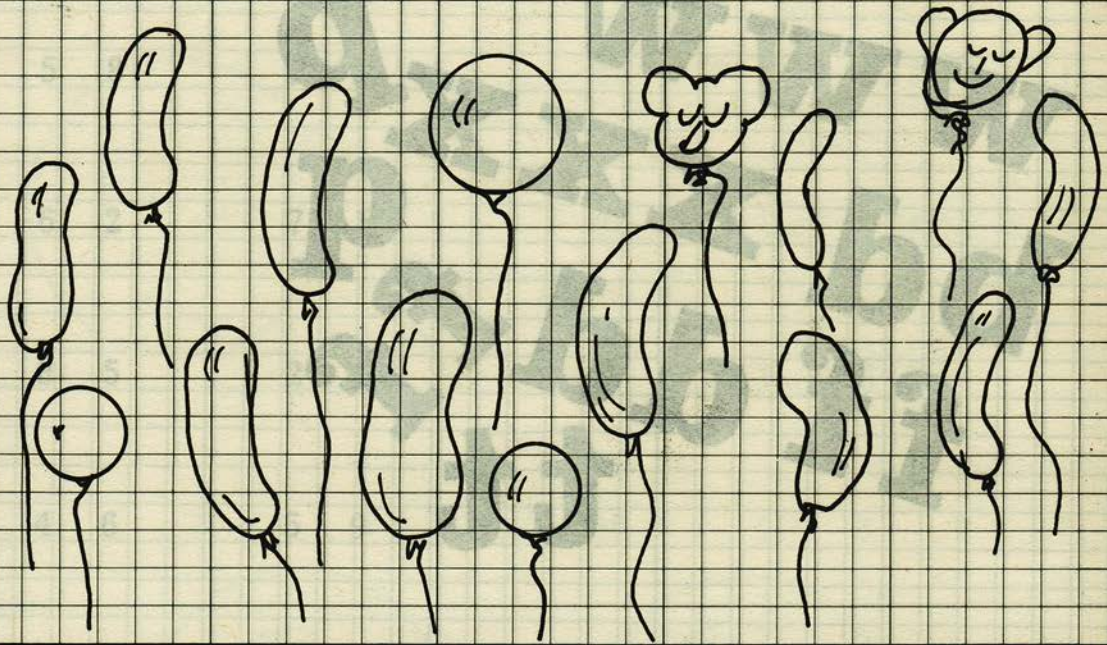
Raggruppa per 2

w w w
b d x x x p
f f d d d q
t t

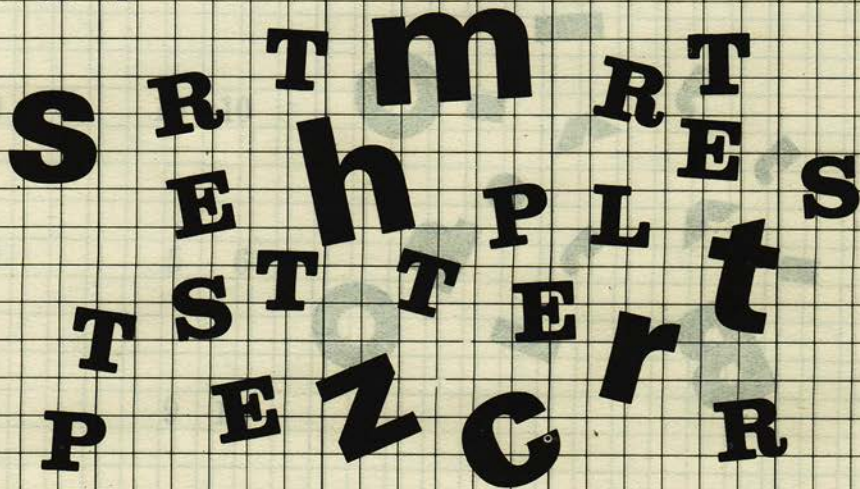
Raggruppa per 3

l i o
l i o
B i o


Raggruppa per 5




Raggruppa per 6




Raggruppa per 7




Raggruppa per 8




Raggruppata per 4



Raggruppata per 9



Raggruppa per 10



Completa:

1 2 3 4 5 6 7 8 9 10 11 12 13 14 15 16

$$8 + 7 =$$

1 2 3 4 5 6 7 8 9 10 11 12 13 14 15 16

$$9 + 7 =$$

1 2 3 4 5 6 7 8 9 10 11 12 13 14 15 16

$$9 + 6 =$$

1 2 3 4 5 6 7 8 9 10 11 12 13 14 15 16

$$8 + 8 =$$

1 2 3 4 5 6 7 8 9 10 11 12 13 14 15 16

$$10 + 5 =$$

1 2 3 4 5 6 7 8 9 10 11 12 13 14 15 16

$$5 + 7 =$$

Completa:

$5 + 5 + 1 =$

$5 + 5 + 4 =$

$5 + 5 + 5 =$

$5 + 5 + 7 =$

$5 + 5 + 3 =$

$5 + 5 + 9 =$

$5 + 5 + 2 =$

$5 + 5 + 6 =$

$5 + 5 + 8 =$

Completa:

$10 + 4 =$

$10 + 6 =$

$10 + 5 =$

$10 + 3 =$

$10 + 1 =$

$10 + 7 =$

$10 + 8 =$

$10 + 2 =$

$10 + 9 =$

Completa:



$9 + 4 =$

$10 + 3 =$

$8 + 7 =$

$10 + 5 =$

$4 + 9 =$

$10 + 3 =$

$5 + 8 =$

$10 + 3 =$

$9 + 9 =$

$10 + 8 =$

$7 + 6 =$

$10 + 3 =$

$5 + 7 =$

$10 + 2 =$

$4 + 7 =$

$10 + 1 =$

$9 + 3 =$

$10 + 2 =$

Completa:



$5 + 3 =$

$8 - 3 =$

$8 - 5 =$

$7 + 4 =$

$11 - 7 =$

$11 - 4 =$

$5 + 4 =$

$9 + 5 =$

$9 + 4 =$

Completa:



$3 + 4 =$

$7 - 3 =$

$7 - 4 =$

$8 + 9 =$

$17 - 8 =$

$17 - 9 =$

$5 + 9 =$

$14 - 9 =$

$14 - 5 =$

Completa:



$$3 + \quad = 7$$



$$+ 4 = 10$$

$$5 + \quad = 9$$

$$+ 5 = 10$$

$$6 + \quad = 8$$

$$+ 6 = 10$$

$$7 + \quad = 10$$

$$+ 9 = 10$$

$$5 + \quad = 10$$

$$+ 7 = 10$$

$$7 + \quad = 10$$

$$+ 8 = 10$$

$$1 + \quad = 10$$

$$+ 1 = 10$$


$$9 + \quad = 10$$

$$+ 2 = 10$$


$$1 + \quad = 10$$

$$+ 3 = 10$$

Completa:



$7 - \quad = 5$



$\quad - 4 = 6$

$8 - \quad = 5$

$\quad - 2 = 8$

$6 - \quad = 3$

$\quad - 8 = 2$

$9 - \quad = 1$

$\quad - 4 = 4$

$4 - \quad = 2$

$\quad - 5 = 5$

$5 - \quad = 1$

$\quad - 6 = 4$

$9 - \quad = 2$

$\quad - 7 = 1$

$8 - \quad = 7$

$\quad - 5 = 1$


$8 - \quad = 3$

$\quad - 7 = 1$

Raggruppa per dieci.



decine unità




decine unità




decine unità



decine unità




decine unità



decine unità


Raggruppa per dieci.



decine unità




decine unità



decine unità



decine unità



decine unità



decine unità


Raggruppa per dieci.



decine unità




decine unità



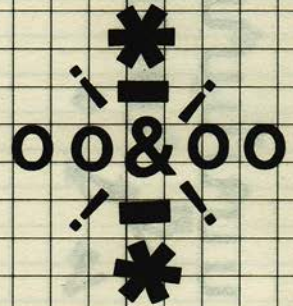
decine unità



decine unità



decine unità

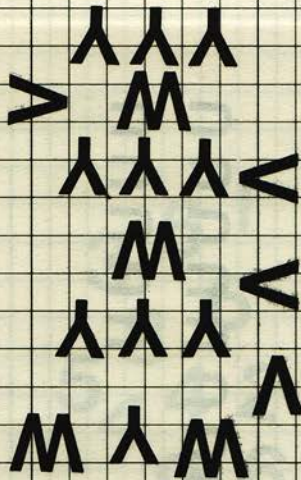


decine unità

Raggruppa per dieci.



decine unità



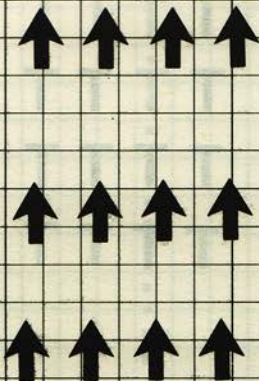
decine unità




decine unità



decine unità



decine unità



decine unità

Raggruppa per dieci.

00000000
00000000

decine unità

nnnnnnnn
nnnnnnnn

decine unità

SSSSSSSS
SSSSSSSS

decine unità

^^^
^^^
^^^
^^^

decine unità

TTTT
TTTT
TTTT
TTTT

decine unità

XXXXXX
XXXXXX
XXXXXX

decine unità


Raggruppa per dieci.

t b
l z
h g c
p n h f
q s h d
r t d
m

decine unità

3 5 1
5 8 6
4 4 2
9 6

decine unità




decine unità

X
X
X
X

decine unità



decine unità



decine unità

Riunisci e raggruppa per 10

esempio:

$5 + 6 =$

$5 + 6 = 10 + 1$

$9 + 7 =$

$6 + 5 =$

$8 + 7 =$

$7 + 7 =$

$6 + 7 =$

$5 + 7 =$

$6 + 8 =$

$5 + 8 =$

$6 + 6 =$

$6 + 9 =$

$5 + 9 =$

Riunisci e raggruppa per 10

$4 + 8 =$

$3 + 8 =$

$4 + 7 =$

$9 + 8 =$

$9 + 6 =$

$9 + 2 =$

$9 + 3 =$

$8 + 4 =$


$9 + 9 =$

$8 + 8 =$

$7 + 7 =$

$4 + 9 =$


Raggruppa per 3



risultano

gruppi

avanza




risultano

gruppi

avanza


Raggruppa per 6



risultano

gruppi

avanza




risultano

gruppi

avanza

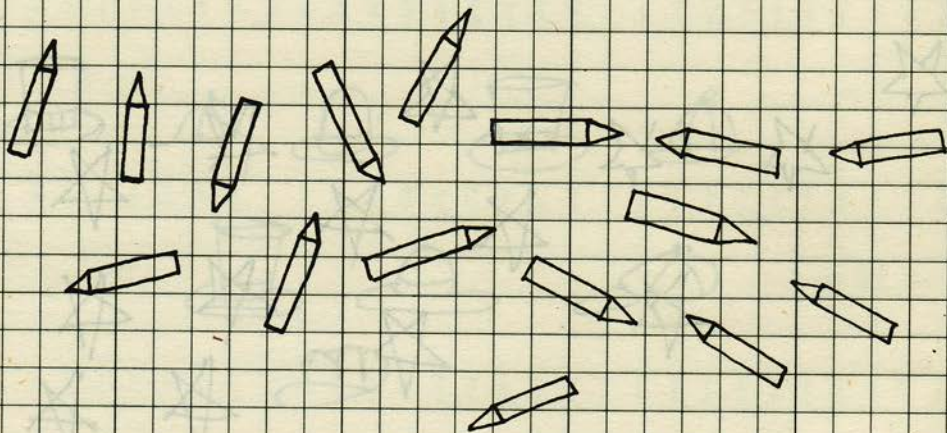
Raggruppa per 9



risultano

gruppi

avanza

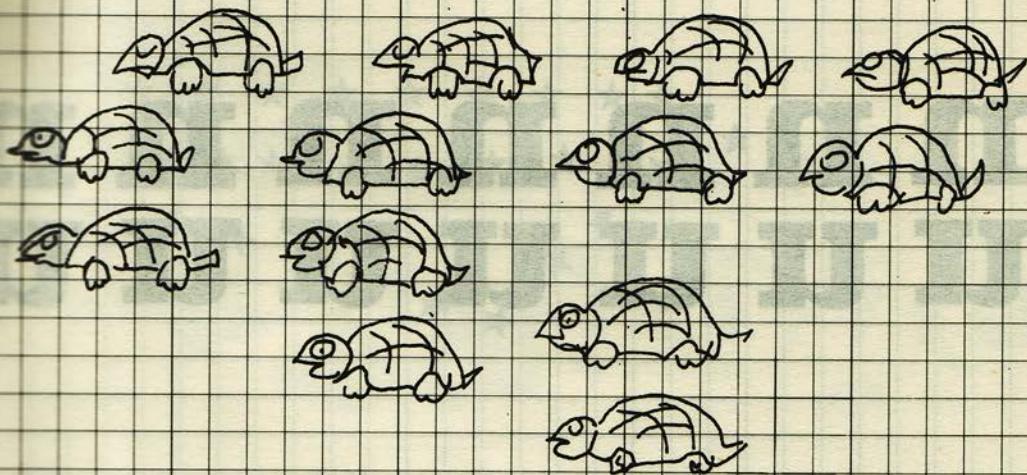


risultano

gruppi

avanza


Raggruppa per 7



risultano

gruppi

avanza



risultano

gruppi

avanza

Raggruppa per 8

n n n n n n n
u u u u u u u

risultano gruppi


avanza

o o o o o o o o
o o o o o
o o o o o o o

risultano gruppi

avanza

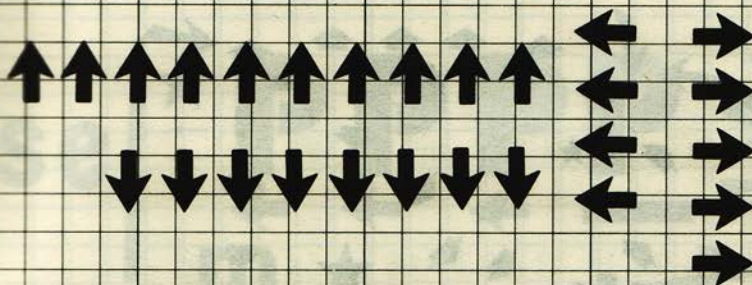
Raggruppa per 5



risultano

gruppi

avanza

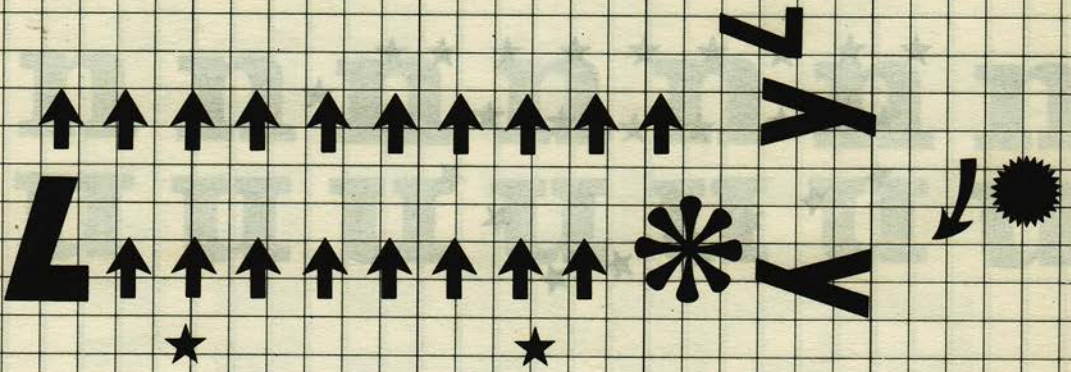


risultano

gruppi

avanza


Raggruppa per 2



risultano

gruppi

avanza




risultano

gruppi

avanza


Raggruppa per 4



risultano

gruppi

avanza



risultano

gruppi

avanza

Osserva i numeri segnati qui sotto e fai una croce sui numeri maggiori di 15.

1 2 3 4 5 6 7 8 9 10 11 12 13 14 15 16 17 18 19 20

Fai una croce sui numeri maggiori di 7.

Fai un cerchietto sui numeri minori di 10.

1 2 3 4 5 6 7 8 9 10 11 12 13 14 15 16 17 18 19 20

Fai un cerchio sui numeri minori di 12.

Fai una crocetta sui numeri maggiori di 14.

1 2 3 4 5 6 7 8 9 10 11 12 13 14 15 16 17 18 19 20

Fai un cerchio sui numeri minori di 10.

Fai una crocetta sui numeri minori di 20.

1 2 3 4 5 6 7 8 9 10 11 12 13 14 15 16 17 18 19 20

Fai una croce sui numeri maggiori di 10.

Fai un cerchio sui numeri minori di 14.

1 2 3 4 5 6 7 8 9 10 11 12 13 14 15 16 17 18 19 20

Completa. Il risultato deve essere sempre 15

$$20 - \quad = 15$$

$$24 - \quad = 15$$

$$18 - \quad = 15$$

$$15 - \quad = 15$$

$$21 - \quad = 15$$

$$40 - \quad = 15$$

$$60 - \quad = 15$$

$$25 - \quad = 15$$

$$30 - \quad = 15$$

$$27 - \quad = 15$$

$$32 - \quad = 15$$

$$36 - \quad = 15$$

$$50 - \quad = 15$$

Completa. Il risultato deve essere sempre 18

$$20 - \quad = 18$$

$$24 - \quad = 18$$

$$26 - \quad = 18$$

$$30 - \quad = 18$$

$$29 - \quad = 18$$

$$18 - \quad = 18$$

$$50 - \quad = 18$$

$$28 - \quad = 18$$

$$31 - \quad = 18$$

$$35 - \quad = 18$$

$$38 - \quad = 18$$

$$23 - \quad = 18$$

$$40 - \quad = 18$$

risultato deve essere sempre 17

$$22 - \quad = 17$$

$$28 - \quad = 17$$

$$30 - \quad = 17$$

$$19 - \quad = 17$$

$$26 - \quad = 17$$

$$17 - \quad = 17$$

$$50 - \quad = 17$$

$$31 - \quad = 17$$

$$28 - \quad = 17$$

$$23 - \quad = 17$$

$$25 - \quad = 17$$

$$34 - \quad = 17$$

$$40 - \quad = 17$$

Completa:

$$2 + 8 - 2 =$$

$$5 + 10 - 5 =$$

$$10 + 4 - 2 =$$

$$15 + 5 - 4 =$$

$$3 \times 2 + 2 =$$

$$4 \times 5 + 4 =$$

$$3 \times 3 + 5 =$$

$$5 \times 4 + 5 =$$

$$10 - 8 - 1 =$$

$$20 - 7 - 3 =$$

$$30 - 5 - 5 =$$

$$50 - 10 - 10 =$$